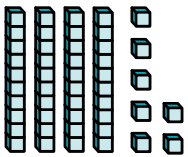


Let's Count



How many tens or ones?

1



4 tens + ones

2



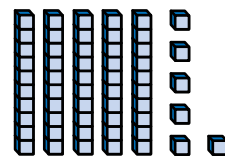
3 tens + ones

3



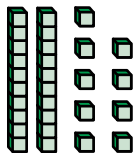
ten + 0 ones

4




tens + 6 ones

5



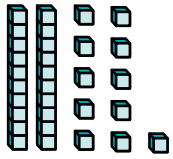
2 tens + ones

6



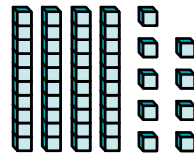
6 tens + ones

7



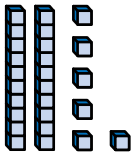
2 tens + 7 ones

8



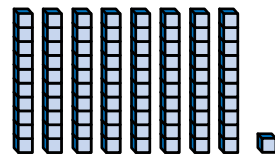
3 tens + 9 ones

9




2 tens + 4 ones

10



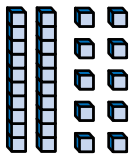
6 tens + 1 one

11



7 tens + 2 ones

12



2 tens + 5 ones



A

B

C

D

E

F

2

9

11

8

4

10

1

6

5

7

0

3

G

H

I

J

K

L

Objective: Count the number of tens and ones using place-value models.

