

Name: _____

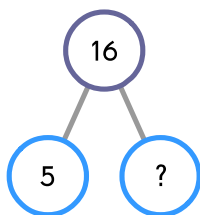
Date: _____

1

Select the correct answer.

Complete the number bond.

- A 5
- B 11
- C 21
- D 33



2

Select the correct answer.

1 ten 2 ones + 4 ones = _____

- A 1 ten 6 ones
- B 17
- C 2 tens
- D 16 tens

3

Select the correct answer.

Which two numbers make up 17?

- A 9 and 2
- B 8 and 5
- C 7 and 8
- D 8 and 9

4

Select the correct answer.

Which number comes next in the pattern below?

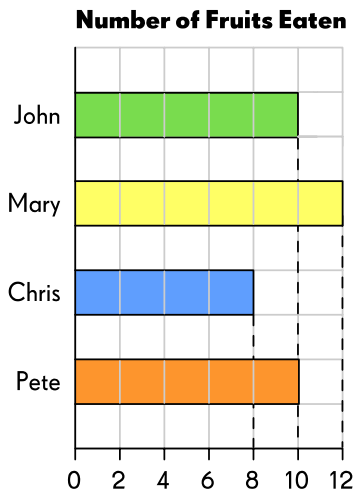
5, 6, 7, 8, _____

- A 4
- B 9
- C 10
- D 12

5

Select the correct answer.

The graph shows the number of fruits that John, Mary, Chris and Pete ate in a week.



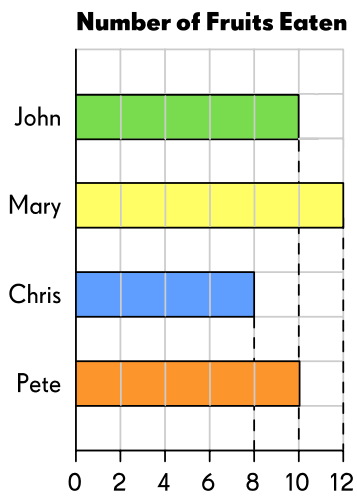
_____ ate the most number of fruits in a week.

- A John
- B Mary
- C Chris
- D Pete

6

Select the correct answer.

The graph shows the number of fruits that John, Mary, Chris and Pete ate in a week.



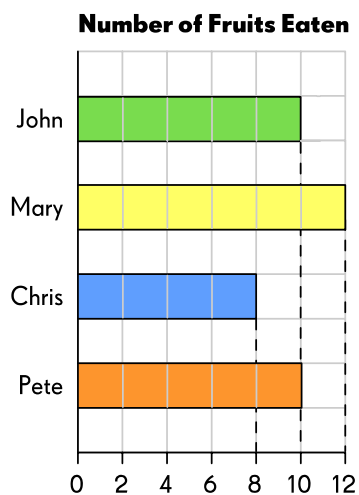
_____ and _____ ate the same number of fruits in the week.

- A John and Mary
- B Mary and Chris
- C Chris and Pete
- D John and Pete

7

Select the correct answer.

The graph shows the number of fruits that John, Mary, Chris and Pete ate in a week.




In a week, they ate _____ fruits altogether.


- A 28
- B 34
- C 40
- D 50

8

Select the correct answer.

The hammer is about _____  long.

- A 8
- B 9
- C 11
- D 12



9

Select the correct answer.

The time shown on the clock is _____.

- A 12:30
- B 1:00
- C 1:30
- D 2:00



10

Select the correct answer.

The value of the coins is _____ in all.

- A 43¢
- B 52¢
- C 62¢
- D 92¢



11

Select the correct answer.



Which shape shows halves?

- A square
- B triangle
- C circle
- D rectangle

12

Select the correct answer.

Which is greater?

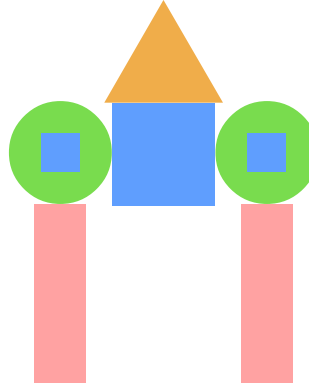
63 36

13

Select the correct answer.

The orange shape in the picture is a _____ .

- A circle
- B triangle
- C rectangle
- D square



14

Select the correct answer.

Gareth had 19 cupcakes.
He gave 7 cupcakes to Luka.
How many cupcakes did Gareth have left?


- A 5
- B 7
- C 12
- D 26

15

Select the correct answer.

Cody goes for a jog at the park at _____.

- A 4 o'clock
- B 5 o'clock
- C half past 4
- D half past 5




16

Select the correct answer.

Who is fifth in line?

- A Sara
- B Yenny
- C Zoe
- D Uri



17

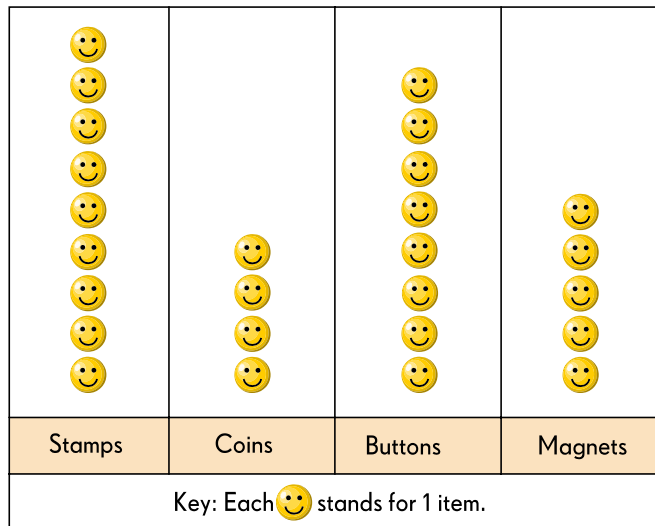
Select the correct answer.

The picture graph shows the items in Debbie's collection box.

Debbie has _____ fewer coins than stamps.

- A 1
- B 3
- C 4
- D 5

Items in Debbie's Collection Box




18

Select the correct answer.

The picture graph shows the items in Debbie's collection box.

She has the greatest number of _____.

- A stamps
- B coins
- C buttons
- D magnets



19

Select the correct answer.

$3 + 3 + 3 + 3 + 3 + 3 + 3 + 3 =$ _____ threes

- A 3
- B 8
- C 24
- D 33

20


Select the correct answer.

Jack has 4 baskets.
He places 6 apples in each basket.
How many apples are there in all?

- A 2
- B 6
- C 10
- D 24

21

Fill in the blank.

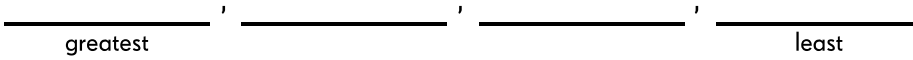


How many cubes are there?
Express the answer in words.

Answer:

22

Order the numbers from the greatest to the least.



23

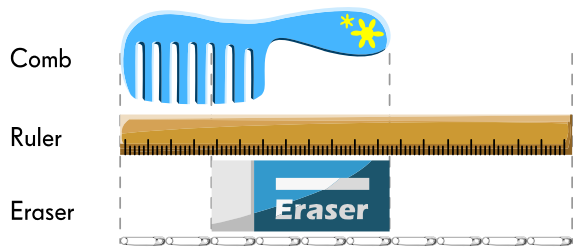
Complete the pattern.



28

Fill in the blank.

Each  stands for 1 unit.



- comb
- ruler
- eraser


The longest object is the _____ .

29

Fill in the blanks.

The robot is made up of:

- triangles
- rectangles
- circles



30

Fill in the blank.

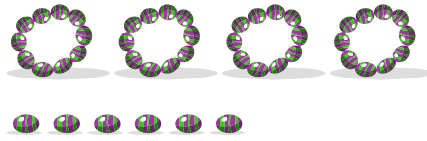


How many fourths are shaded?

31

Fill in the blanks.

tens 6 ones =



32

Fill in the blank.




Put the caterpillars in groups of 6.

There are groups of 6 caterpillars.

33

Fill in the blank.



7 fives =

34

Select the correct answers.

Which two numbers will give you 56 when you add them?

| | | | | |
|----|----|----|----|----|
| 40 | 16 | 37 | 24 | 31 |
| 20 | | | | |

_____ + _____ = 56

35

Fill in the blanks.



There are groups of 4 butterflies.

36

Fill in the blanks.

Complete the number patterns.

95, 89, 83, , , 65,

37

Select the correct answers.

Which two numbers make 5 tens 17 ones?





| | | | | |
|----|----|----|----|----|
| 21 | 43 | 26 | 41 | 67 |
|----|----|----|----|----|

Answer: _____ , _____

38

Select the correct answers.

Which two items cost 72¢ in all?

| | | | |
|---|---|--|---|
|  |  |  |  |
| Envelope | Scissors | Glue Stick | Highlighter |
| <input type="checkbox"/> | <input type="checkbox"/> | <input type="checkbox"/> | <input type="checkbox"/> |

39

Fill in the blank.



Jane has dinner at _____ .

Fill in the blank.



storybook
\$10



calculator
\$19

The calculator costs \$ more than the book.