


# Mathematics

## Diagnostic Tests 100-400



Sunrise Edition



Name \_\_\_\_\_



MATH 100-400 Diagnostic Tests

Christian Light Education, a division of  
Christian Light Publications, Inc., Harrisonburg, VA 22802

© 2005 by Christian Light Publications, Inc.

All Rights Reserved.

Printed in the United States of America

**2005 Edition**

Fourth Printing, 2012

# MATH 100-400 DIAGNOSTIC TESTS

## CONTENTS

<b>Level 100, Sunrise Edition</b> .....	<b>1</b>
<b>Level 200, Sunrise Edition</b> .....	<b>10</b>
<b>Level 300, Sunrise Edition</b> .....	<b>19</b>
<b>Level 400, Sunrise Edition</b> .....	<b>31</b>

The material in this book is  
the product of the Lord's blessing  
and many individuals working together  
at Christian Light Publications.



**CHRISTIAN LIGHT EDUCATION**

*A division of Christian Light Publications*

Harrisonburg, Virginia 22802 (540) 434-0750 [www.clp.org/cle](http://www.clp.org/cle)

# Notes for the Teacher

## Why Diagnostic Testing?

Diagnostic tests are specifically designed to determine where a student should begin in the curriculum. Results from these tests give better direction for placement than a student's age or grade level since the course of study varies so much between schools and curricula.

## What Portion of This Booklet Should a Student Complete?

This book covers four levels—100, 200, 300, and 400. Use this chart to decide which ones to work through.

Grade Student is Entering	Work through levels
1	Testing not needed
2	100
3	100-200
4	200-300
5	300-400
6 and up	*Use test booklet 500-800

\*You will need a different booklet to test students in grades 6 and up.

## How Should the Test be Administered?

*Time.* This is not a timed test. Students may take as much time as needed. Give periodic breaks, at least five to ten minutes every hour, and more often for younger students. Ideally, testing should be spread over a two-day period. Test weariness gives unreliable test results.

*Guidance.* You may help students understand instructions; however, do not hint at solutions to problems.

*Calculators.* There are no designated calculator exercises in this booklet. Calculators should not be used.

*Environment.* Inform students that the test is important, but avoid a tense atmosphere. Help them to feel that the best they can do is good enough. Check comfort factors such as lighting and ventilation. Keep noise and other disturbances to a minimum.

*Progress.* **For Levels 100-400 (Sunrise Math)** Since the different concepts in Sunrise Edition are learned incrementally and spread throughout the year, these levels are tested by entire level, and not by individual LightUnits. The activities in each test are grouped by concepts. The student should begin with the first concept and do as many activities as possible in each group.

## How Do I Score the Test?

Using the answers in the Teacher's Manual, put a mark through the number of each question the student answered incorrectly.

**For Levels 100-400 (Sunrise Math).** Determine the number of activities done correctly out of the total for each level.

## How Do I Then Determine Placement?

Use the *Diagnostic Test Summary* page found on page vii of this book.

1. Fill in the **Diagnostic Test Summary** on page vii. If you are enrolled with Homeschool Plus at Christian Light Education tear out this perforated sheet and send it to Homeschool Plus.
2. **For Level 100 (Sunrise Math).** If the student has 40 or more correct answers, he is prepared for Level 200. If less than 40 are correct, the student is not prepared for Level 200, and should do all or most of *Sunrise Math 100* before entering Level 200. If the number correct is in the upper thirties, check the test for an unusual weakness in one or more concepts. If most errors were made in one or two groups, perhaps some remedial work could adequately prepare the child for the next level. However, exercise caution. It is better to build confidence in the child by letting him move quickly through material at an easier level than to frustrate him with a higher level than he can efficiently manage.

**For Level 200 (Sunrise Math).** If the student has 55 or more correct answers, he is prepared for Level 300. If less than 55 are correct, the student is not prepared for Level 300, and should begin with *Sunrise Math Level 200*.

**For Level 300 (Sunrise Math).** If the student has 75 or more correct answers, he is prepared for Level 400. If less than 75 are correct, the student is not prepared for Level 400, and should begin with *Sunrise Math Level 300*.

**For Level 400 (Sunrise Math).** If the student has 64 or more correct answers, he is prepared for Level 500. If less than 64 are correct, the student is not prepared for Level 500 and should begin with *Sunrise Math Level 400*.

If you have questions or need further assistance, feel free to contact CLE by phone (540-434-0750), FAX (540-433-8896), E-mail ([homeschool@clp.org](mailto:homeschool@clp.org)), or write us at P.O. Box 1212, Harrisonburg, VA 22803.

## Note About Diagnostic Testing for Sunrise Math

Sunrise Math uses an incremental approach, teaching various concepts throughout each level, rather than grouping certain math concepts by LightUnit. Therefore, the diagnostic tests evaluate performance by concepts rather than LightUnits.

If a student's score on a particular grade level is below our recommended score for adequate performance in that level, take a second look at the concepts tested. The student may be weak in only one or two areas. For example, algebra and geometry concepts in Sunrise Math tend to be a little more advanced than those in some other curricula. If the student is competent in other areas, and you are willing to spend extra time doing necessary remedial work with this student in the concepts he has never mastered, you are probably safe to place him in that particular level even if his total score is below the one recommended.

A student whose total score is well below the recommended level for proficiency will likely face frustration if he is placed into a higher level than he is ready for. If it is important that he catch up to his "correct" grade level due to his age or parental or school expectations, the teacher may need to provide considerable remedial help. Or the student could work in a previous level, completing several lessons a day and skipping some of the daily review work, which he has already sufficiently mastered. This suggestion might work well for a student with good reading comprehension skills and a strong motivation to learn on his own.

These diagnostic tests are intended to give an accurate picture of what the student has learned and where he likely has weak areas. In order to maximize the satisfaction and ease of use for both student and teacher, school staff should also use their judgment of a student's academic competence and motivation as well as the available time and remedial resources in determining a student's grade placement.



# Diagnostic Test Summary

## Math 100-400

Name \_\_\_\_\_ Date \_\_\_\_\_

Parents \_\_\_\_\_

---

LightUnit	Amount Correct	LightUnit	Amount Correct
-----------	----------------	-----------	----------------

Level 100 \_\_\_\_\_

Level 300 \_\_\_\_\_

Level 200 \_\_\_\_\_

Level 400 \_\_\_\_\_





# Level 100

## Sunrise Edition

Clock


of 4 problems correct

Write the time for each clock in the box.


1.



2.



3.



Write how many minutes are in one hour.

4.

minutes

Addition

of 5 problems correct

Write the sums.

5.  $2 + 3 + 4 =$

6.  $0 + 6 + 2 =$

7.  $3 + 5 + 1 =$

8. 
$$\begin{array}{r} 6 \\ 2 \\ + 1 \\ \hline \end{array}$$

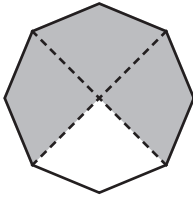
9. 
$$\begin{array}{r} 1 \\ 0 \\ + 7 \\ \hline \end{array}$$

Fractions

of 6 problems correct


Circle the fraction that shows how many parts are colored.

10.



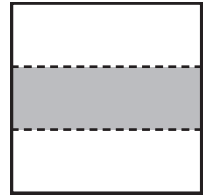
$\frac{1}{4}$     $\frac{3}{4}$     $\frac{2}{4}$

11.



$\frac{1}{3}$     $\frac{1}{4}$     $\frac{1}{2}$

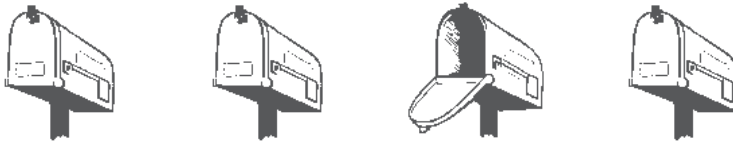
12.



$\frac{2}{4}$     $\frac{1}{4}$     $\frac{1}{3}$

Circle the fraction that shows how many mailboxes are open?

13.



$\frac{2}{3}$     $\frac{1}{4}$     $\frac{3}{4}$

Circle  $\frac{1}{2}$  of the butterflies.

14.



Write the answers.

15.  $4 + 4 = \square$

$\frac{1}{2}$  of 8 =  $\square$

Numbers

of 5 problems correct

Write the numbers that come before and after.

16. \_\_\_\_\_ 136 \_\_\_\_\_

Circle the number that comes between 65 and 75.

17. 22      80      70

Circle the group of odd numbers.

18.

8	4	22	10
---	---	----	----

9	13	5	27
---	----	---	----

Write the number.

19. two hundred two

Write the number for each place.

219

20. \_\_\_\_\_ ones place    \_\_\_\_\_ tens place    \_\_\_\_\_ hundreds place

Addition and Subtraction

of 5 problems correct

Write the answers.

21.

$$\begin{array}{r} 23 \\ + 64 \\ \hline \end{array}$$

22.

$$\begin{array}{r} 97 \\ - 74 \\ \hline \end{array}$$

23.

$$\begin{array}{r} 57 \\ + 22 \\ \hline \end{array}$$

24.

$$\begin{array}{r} 923 \\ + 72 \\ \hline \end{array}$$

25.

$$\begin{array}{r} 63 \\ + 35 \\ \hline \end{array}$$

Money

of 6 problems correct

Count the money and write the amount. Use the ¢ sign for numbers 26 and 27. Use the \$ sign for number 28.

26.



27.



28.



Read and write the amount. Use \$ signs and decimal points.

29. seven dollars and ten cents

30. three dollars

Underline the correct way to read \$4.24.

31. four twenty-four

four dot twenty-four

four dollars and twenty-four cents

Addition and Subtraction

of 5 problems correct

32.

$$\begin{array}{r} 9\ 6 \\ - 5\ 2 \\ \hline \end{array}$$

33.

$$\begin{array}{r} 4\ 5 \\ + 2\ 3 \\ \hline \end{array}$$

34.

$$\begin{array}{r} 9\ 9\ 8 \\ - 4\ 2\ 6 \\ \hline \end{array}$$

35.

$$\begin{array}{r} 4\ 9\ 6 \\ - 3\ 4 \\ \hline \end{array}$$

36.

$$\begin{array}{r} 2\ 6\ 5 \\ + 4\ 2\ 4 \\ \hline \end{array}$$

Patterns

of 4 problems correct

Write 261 in the box on the left side of the tree.

37.




Write > or <.

38.


$5 \square 2$

39.

$6 \square 7$

Color the shapes that are congruent (similar).

40.



Thinking Skills

of 4 problems correct

Draw the next three shapes in the pattern.

41.



Write numbers to finish the pattern.

42. 2, 4, 6,

Circle *true* or *false*.

43. Birds have four legs. true false

44. God loves everyone. true false

Addition and Subtraction  of 5 problems correct

45.

$$\begin{array}{r} 89 \\ - 26 \\ \hline \end{array}$$

46.

$$\begin{array}{r} 76 \\ - 33 \\ \hline \end{array}$$

47.

$$\begin{array}{r} 988 \\ - 653 \\ \hline \end{array}$$

48.

$$\begin{array}{r} 578 \\ - 34 \\ \hline \end{array}$$

49.

$$\begin{array}{r} 544 \\ + 353 \\ \hline \end{array}$$

Measurements  of 4 problems correct

Measure the length of the pencil.

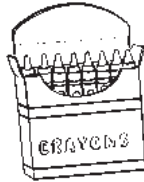



Use your ruler to draw a line 6 centimeters long. Start at the dot.



52. 1 foot equals  inches.

53. Circle the group that is a dozen.



Story Problems  of 7 problems correct



54. “Susan,” called Mother. “Please go to the garden and pick 4 green peppers and 2 cucumbers.”  
How many vegetables did Susan pick?

$$\boxed{\text{---}} + \boxed{\text{---}} = \boxed{\text{---}} \text{ vegetables}$$



55. “I saw 4 robins yesterday morning on the way to school. This morning I saw 3,” said James.  
How many robins did James see altogether?

$$\boxed{\text{---}} + \boxed{\text{---}} = \boxed{\text{---}} \text{ robins}$$



56. Janice was very sick. On Tuesday 4 of her friends visited her. On Thursday 6 friends came to visit. How many friends visited Janice on Tuesday and Thursday?

friends



57. Mother picked 9 quarts of strawberries. She gave 3 quarts to Mrs. Jones. How many quarts of strawberries did she have left?

quarts of strawberries



58. Miss Mary put 8 eggs in the incubator. After a few weeks 6 of the eggs hatched. How many eggs did not hatch?

eggs





59. Kenneth counted 9 geese on the pond. 4 geese flew to the cornfield. How many geese were left on the pond?

geese



60. It snowed all day on Wednesday. George measured 4 inches on the deck. On Friday it snowed 3 more inches. How many inches of snow fell on the two days?

inches

# Level 200

## Sunrise Edition

Addition and Subtraction

of 6 problems correct

Write the answers.

$$1. \begin{array}{r} 64 \\ + 29 \\ \hline \end{array}$$

$$2. \begin{array}{r} 82 \\ - 26 \\ \hline \end{array}$$

$$3. \begin{array}{r} \$2.34 \\ + 6.83 \\ \hline \end{array}$$

$$4. \begin{array}{r} \$6.25 \\ - 2.04 \\ \hline \end{array}$$

$$5. \begin{array}{r} 532 \\ 13 \\ + 26 \\ \hline \end{array}$$

$$6. \begin{array}{r} 625 \\ - 232 \\ \hline \end{array}$$

Calendar

of 5 problems correct

Write the answers.

7. 1 week = \_\_\_\_\_ days

8. 1 year = \_\_\_\_\_ months

Number the months in order.

9. \_\_\_\_\_ July

\_\_\_\_\_ March

\_\_\_\_\_ June

\_\_\_\_\_ January

\_\_\_\_\_ August

\_\_\_\_\_ November

\_\_\_\_\_ October

\_\_\_\_\_ September

\_\_\_\_\_ April

\_\_\_\_\_ May

\_\_\_\_\_ February

\_\_\_\_\_ December

Answer the questions from the calendar page.

10. Andrew's class planned to take a field trip on the third Tuesday in May.

What day is that in May? \_\_\_\_\_

11. What day of the week is May 30?

\_\_\_\_\_  
 -----  
 \_\_\_\_\_

May						
S	M	T	W	T	F	S
	1	2	3	4	5	6
7	8	9	10	11	12	13
14	15	16	17	18	19	20
21	22	23	24	25	26	27
28	29	30	31			

Clock

of 4 problems correct

Write the answer.

12. 1 day = \_\_\_\_\_ hours

Circle the sensible time.

13. pick flowers for Grandmother

4:30 a.m.


4:30 p.m.

14. wash the breakfast dishes

7:30 a.m.

7:30 p.m.

Write the time shown on the clock.



15. \_\_\_\_\_

**Addition and Subtraction**  of 5 problems correct

Write *sum* or *difference* or *addend*.

Set up the problems and solve.

16. In  $7 + 8 = 15$ , 15 is the

\_\_\_\_\_ .  
 \_\_\_\_\_ .  
 \_\_\_\_\_ .

17. In  $63 + 24 = 87$ , the first

\_\_\_\_\_ is 63.  
 \_\_\_\_\_ .  
 \_\_\_\_\_ .

18. In  $53 - 22 = 31$ , 31 is the

\_\_\_\_\_ .  
 \_\_\_\_\_ .  
 \_\_\_\_\_ .

19.  $427 + 53$

Set up the problem.

20.  $964 - 52$

Set up the problem.

**Fractions**  of 4 problems correct

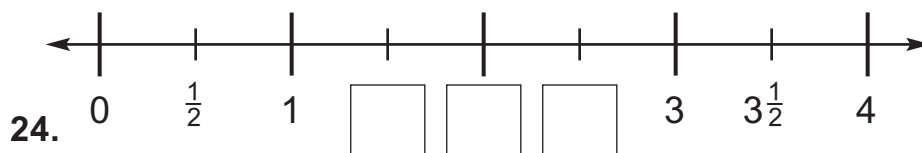
△ Read the fractions aloud.

21.  $\frac{4}{6}$

22.  $\frac{2}{3}$

23.  $\frac{1}{2}$

Fill in the missing parts of the numberline.



**Geometry**  of 16 problems correct

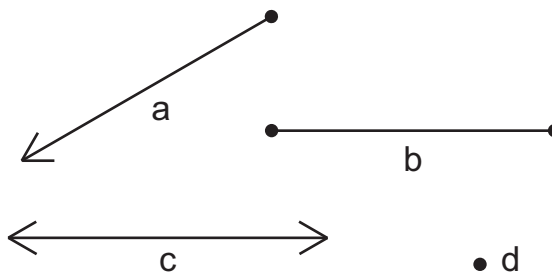
Write the letter of each figure beside its name.

25. \_\_\_\_\_ ray

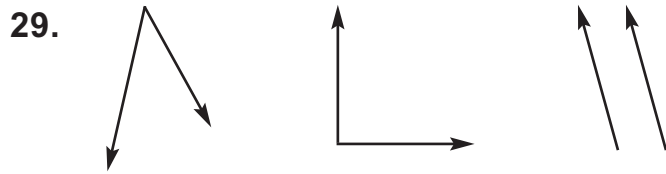
26. \_\_\_\_\_ point

27. \_\_\_\_\_ line

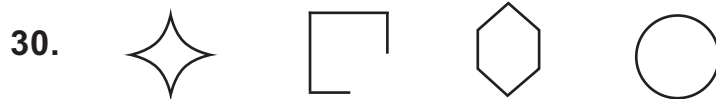
28. \_\_\_\_\_ line segment



Mark the right angle with a little square.



Circle the polygon.



Use a ruler. Draw a line segment to connect points S and T.



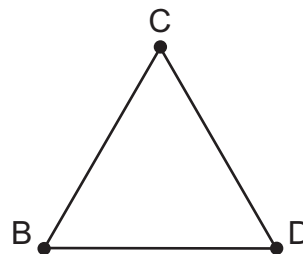
Use a ruler. Draw a line through points J and K.



Write the correct name on the blank.



34. Write the name of the triangle. \_\_\_\_\_



Level 200

Write the letter of the polygon beside the name of its shape.

35. triangle \_\_\_\_\_

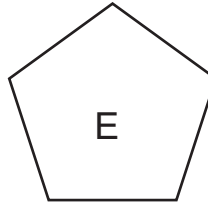
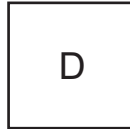
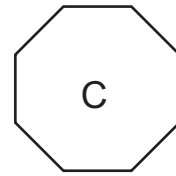
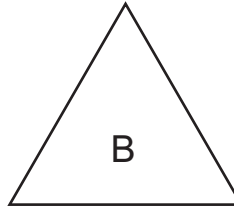
36. pentagon \_\_\_\_\_

37. square \_\_\_\_\_

38. hexagon \_\_\_\_\_

39. octagon \_\_\_\_\_

40. rectangle \_\_\_\_\_



Logic



of 1 problem correct

Which is it? Circle the correct picture.

41. It is a fruit.

It is not the third fruit in the row.

It has many tiny seeds on the outside.



Measures



of 9 problems correct

Write the answers.

42. 1 yard = \_\_\_\_\_ inches

47. 1 yard = \_\_\_\_\_ feet

43. 1 gallon = \_\_\_\_\_ quarts

48. 1 meter = \_\_\_\_\_ centimeters

44. 1 pint = \_\_\_\_\_ cups

49. 1 quart = \_\_\_\_\_ cups

45. 1 quart = \_\_\_\_\_ pints

46. freezing temperatures = \_\_\_\_\_ F \_\_\_\_\_ C

Circle which measurement would be best for measuring your classroom.

50. meter      inch      centimeter

**Money**  of 2 problems correct

Show 2 ways to make 86¢.

Do not use the coins that have a zero in the box.

86¢

	quarters	dimes	nickels	pennies
51.		0		
52.	0			

**Multiplication**  of 8 problems correct

Write the products.

53.  $\begin{array}{r} 6 \\ \times 2 \\ \hline \end{array}$

54.  $\begin{array}{r} 1 \\ \times 12 \\ \hline \end{array}$

55.  $\begin{array}{r} 3 \\ \times 10 \\ \hline \end{array}$

56.  $\begin{array}{r} 5 \\ \times 5 \\ \hline \end{array}$

57.  $\begin{array}{r} 16 \\ \times 0 \\ \hline \end{array}$

Circle *true* or *false*.

58. In  $4 \times 3 = 12$ , 4 and 3 are the factors.      **true**      **false**

59. In  $6 \times 5 = 30$ , 5 is the product.      **true**      **false**

60. Factors can be multiplied in any order.      **true**      **false**

Numbers

of 4 problems correct

Finish counting by 3's.

61. 3    \_\_\_\_\_    \_\_\_\_\_    \_\_\_\_\_    15    \_\_\_\_\_    \_\_\_\_\_    \_\_\_\_\_    \_\_\_\_\_

Finish counting by 4's.

62. 4    \_\_\_\_\_    \_\_\_\_\_    \_\_\_\_\_    20    \_\_\_\_\_    \_\_\_\_\_    \_\_\_\_\_    \_\_\_\_\_

Write the numbers.

63. four thousand, three \_\_\_\_\_

64. six thousand, twenty-four \_\_\_\_\_

Patterns/Relations

of 8 problems correct

Finish each number sentence by writing = or  $\neq$ .

65.  $42 \square 16$

66.  $17 - 9 \square 8$

Write the numbers in order from least to greatest.

726    235    645    213

67. \_\_\_\_\_

Write the number that is halfway between these tens or hundreds.

68. 60 \_\_\_\_\_ 70

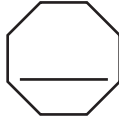
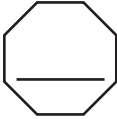
69. 300 \_\_\_\_\_ 400

Write the tens that come before and after.

70.  73 



Write the hundreds that come before and after.

71.  368 

Circle the feather in the horizontal position.

72. 



**Problem Solving**



of 6 parts correct

Solve the story problems in the solution box. Write and label your answer on the blanks.

73-75.

The Old Testament has 5 books of law, 12 books of history, 5 books of poetry, and 17 books of prophecy. How many books are in the Old Testament?

\_\_\_\_\_

=====

-----

=====

Solution Box

76-78.

The New Testament has 5 books of history and 21 letters. How many more letters are there than books of history?

\_\_\_\_\_

=====

-----

=====

Solution Box

Graph and Statistics


of 2 problems correct

Randall counted the balls in the closet. There were basketballs, footballs, and softballs.

Make a tally mark in the correct box for each ball Randall counted.

79.

basketballs
footballs
softballs



Color one box for each ball Randall counted.

80.

basketballs							
footballs							
softballs							
	1	2	3	4	5	6	7

# Level 300

## Sunrise Edition


Fractions

of 13 problems correct

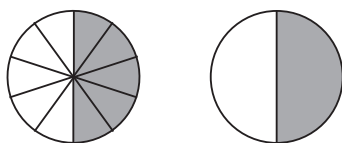
Write the fraction.

1. three-fifths \_\_\_\_\_

2. What fraction of the animals are chipmunks? \_\_\_\_\_



Write the fractions on the lines. Write = or  $\neq$  in the box.



3. \_\_\_\_\_  \_\_\_\_\_

Match.

4. \_\_\_\_\_ denominator

a. the number of parts we have or talk about

5. \_\_\_\_\_ numerator

b. bottom number in a fraction

Write the fraction.

6. denominator 7, numerator 4 \_\_\_\_\_


**Level 300**

**Underline the correct number word for the mixed number,**

$$6\frac{4}{5}$$

7. four-fifths      six and five-fourths      six four-fifths      six and four-fifths

**Write the mixed number that tells how many circles are shaded.**

8. \_\_\_\_\_ 

**Order these fractions from smallest to largest.**       $\frac{1}{6}$     $\frac{1}{4}$     $\frac{1}{9}$     $\frac{1}{5}$     $\frac{1}{7}$

9. \_\_\_\_\_      \_\_\_\_\_      \_\_\_\_\_      \_\_\_\_\_      \_\_\_\_\_

**Write < or >.**

10.  $\frac{2}{8}$    $\frac{2}{6}$

**Circle the fraction that equals 1.**

11.  $\frac{2}{3}$     $\frac{3}{4}$     $\frac{3}{3}$     $\frac{3}{4}$

**Find  $\frac{1}{2}$  of each number.**

12.  $\frac{1}{2}$  of 24 = \_\_\_\_\_      13.  $\frac{1}{2}$  of 86 = \_\_\_\_\_

Measurement


of 8 problems correct

Start at point J. Draw a line segment that is  $2\frac{1}{2}$  inches long.

14. J  
•

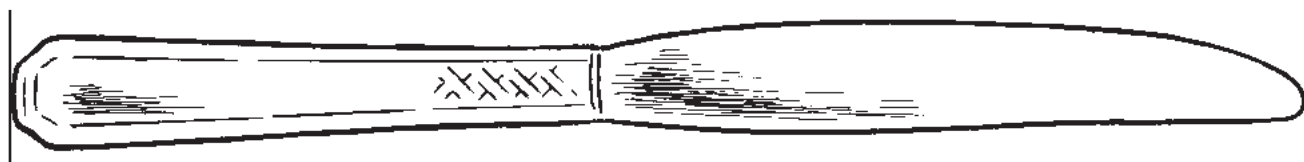
Measure to the nearest inch.

15. \_\_\_\_\_ inches



Measure to the nearest centimeter.

16. \_\_\_\_\_ centimeters




**Level 300**

**Measure with millimeters. Circle the correct answer.**

17. 50 millimeters

54 millimeters

57 millimeters



18. The cracker is \_\_\_\_\_ centimeters long.

**Fill in the blanks.**

19. 3 yards = \_\_\_\_\_ feet

20. 2 gallons = \_\_\_\_\_ quarts

21. 6 meters = \_\_\_\_\_ centimeters

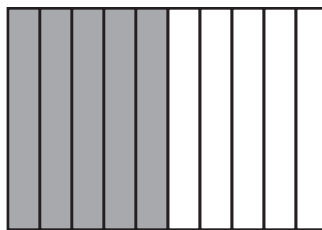
**Decimals**

**of 6 problems correct**

**Write the fraction and the decimal that show how much is shaded.**

22. Fraction \_\_\_\_\_

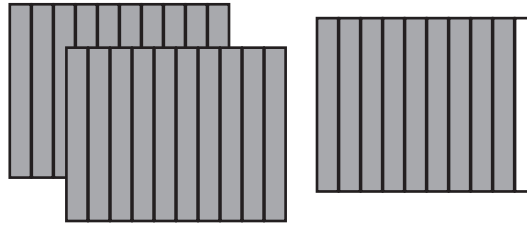
23. Decimal \_\_\_\_\_



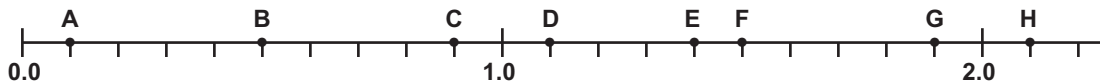
Write the mixed number and the decimal to show how much is shaded.

24. Mixed number \_\_\_\_\_

25. Decimal \_\_\_\_\_



Use the number line to answer the question.



26. What is the decimal number for point E? \_\_\_\_\_

Show these numbers from least to greatest.

27. 4.3, 4.0, 0.4      \_\_\_\_\_      \_\_\_\_\_      \_\_\_\_\_

**Addition**

of 8 problems correct

Find the sums.

28. 
$$\begin{array}{r} 6,354 \\ + 7,967 \\ \hline \end{array}$$

29. 
$$\begin{array}{r} \$236.73 \\ + 529.58 \\ \hline \end{array}$$


30. 
$$\begin{array}{r} 7,856 \\ 95 \\ + 634 \\ \hline \end{array}$$

31. 
$$\begin{array}{r} 24 \\ 52 \\ 75 \\ + 38 \\ \hline \end{array}$$

**Level 300**

**Copy and solve.**

32.  $\$7.63 + \$0.45 + \$0.09$



**Find the sums.**

33.  $\begin{array}{r} 1.6 \\ + 6.9 \\ \hline \end{array}$

34.  $\begin{array}{r} 0.3 \\ + 0.9 \\ \hline \end{array}$

35.  $\begin{array}{r} 9.1 \\ + 0.6 \\ \hline \end{array}$

**Numbers**

**of 16 problems correct**

**Put commas where they belong.**

36. 654123

37. 3820

38. 50005

39. 300000

**Write the numbers.**

40. four hundred twenty thousand, six hundred four \_\_\_\_\_

41. seventy-two thousand, thirty-six \_\_\_\_\_

42. eight hundred two thousand, six hundred forty \_\_\_\_\_



Write the correct digit from 678,542.

43. ones place \_\_\_\_\_

46. ten thousands place \_\_\_\_\_

44. hundreds place \_\_\_\_\_

47. tens place \_\_\_\_\_

45. hundred thousands place \_\_\_\_\_

48. thousands place \_\_\_\_\_

Fill in the blanks.

49. Six and nine-tenths has \_\_\_\_\_ tenths and \_\_\_\_\_ ones.

Write the decimals.

50. nine and two-tenths \_\_\_\_\_

51. four-tenths \_\_\_\_\_

**Subtraction**

of 9 problems correct

**Subtract.**

$$52. \begin{array}{r} 6,583 \\ -2,996 \\ \hline \end{array}$$

$$53. \begin{array}{r} 409 \\ -236 \\ \hline \end{array}$$

$$54. \begin{array}{r} 503 \\ -437 \\ \hline \end{array}$$

$$55. \begin{array}{r} 11,432 \\ -7,917 \\ \hline \end{array}$$

$$56. \begin{array}{r} \$7.00 \\ -3.56 \\ \hline \end{array}$$

$$57. \begin{array}{r} 4,006 \\ -2,368 \\ \hline \end{array}$$


$$58. \begin{array}{r} 2,406 \\ -734 \\ \hline \end{array}$$

$$59. \begin{array}{r} 4.3 \\ -1.9 \\ \hline \end{array}$$

**Level 300**

**Copy and solve.**

60.  $\$603.64 - \$43.29$



**Metric Measures**

**of 5 problems correct**

**Measure the length of the line segment with centimeters. Then give its length in millimeters.**



61. \_\_\_\_\_ cm

62. \_\_\_\_\_ mm

**Fill in the blanks.**

63.  $6 \text{ cm} = \text{_____ mm}$

64.  $3 \text{ mm} = \text{_____ cm}$

65. \_\_\_\_\_ cm + 3 mm = 73 mm or \_\_\_\_\_ cm

**Multiplication**

**of 12 problems correct**

**Multiply.**

66. 
$$\begin{array}{r} 79 \\ \times 6 \\ \hline \end{array}$$

67. 
$$\begin{array}{r} 90 \\ \times 5 \\ \hline \end{array}$$

68. 
$$\begin{array}{r} 34 \\ \times 2 \\ \hline \end{array}$$

Copy and solve.

69.  $36 \times 8$



Match.

70. \_\_\_\_ product                      a. one of the numbers multiplied
71. \_\_\_\_ factor                        b. the answer to multiplication

Circle *true* or *false*.

72. Factors can be multiplied in either order but the product will be the same.  
                  true            false

Write the products.

73.  $6 \times 40 =$  \_\_\_\_\_                      75.  $70 \times 9 =$  \_\_\_\_\_
74.  $8 \times 700 =$  \_\_\_\_\_                      76.  $900 \times 6 =$  \_\_\_\_\_

Circle the row which shows multiples of 7.

77.    4    8    12    16    20    24    28    32    36    40
- 7    14    21    28    35    42    49    56    63    70

**Rounding**

of 14 problems correct

Write the tens that come before and after. Circle the nearest ten.

78. \_\_\_\_\_ 45 \_\_\_\_\_

79. \_\_\_\_\_ 13 \_\_\_\_\_

80. \_\_\_\_\_ 66 \_\_\_\_\_

Write the hundreds that come before and after. Circle the nearest hundred.

81. \_\_\_\_\_ 593 \_\_\_\_\_

82. \_\_\_\_\_ 650 \_\_\_\_\_

83. \_\_\_\_\_ 435 \_\_\_\_\_

Round to the nearest ten.

84. 45 \_\_\_\_\_

85. 82 \_\_\_\_\_

86. 26 \_\_\_\_\_

Round to the nearest hundred.

87. 542 \_\_\_\_\_

88. 853 \_\_\_\_\_

89. 675 \_\_\_\_\_

Write the number that is halfway between the tens or hundreds.

90. 600 \_\_\_\_\_ 700

91. 70 \_\_\_\_\_ 80

## Problem Solving

 of 15 parts correct

**92-94.** Mr. Roberts bought 60 bushels of apples to sell in his community. He had orders for 47 bushels. After the orders were filled, how many bushels did he have left?

\_\_\_\_\_

My Work Space

**95-97.** Alaska, the largest state in the United States, has an area of 586,400 square miles. Rhode Island, the smallest state, has an area of 1,214 square miles. How much larger is Alaska than Rhode Island?

\_\_\_\_\_

My Work Space

**98-100.** Midwest Bible School had 126 students the first term. For second term there were 37 more students than the first term. How many students attended Midwest Bible School the second term?

\_\_\_\_\_

My Work Space

**101-103.** Robert sold ears of corn in bundles of 4. He had 15 bundles. How many ears of corn did he sell?

\_\_\_\_\_

My Work Space

## Level 300

**104-106.** Mr. Layman had 24 customers in his shop on Tuesday and 36 on Wednesday. On those 2 days, 9 customers did not buy anything. How many customers bought items from Mr. Layman's shop on those two days?

\_\_\_\_\_

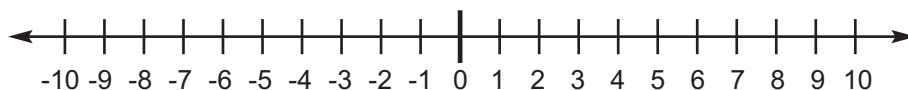
**My Work Space**

# Level 400

## Sunrise Edition

**Algebra**

of 4 problems correct



Use the number line to do the exercises. Write  $<$  or  $>$ .

1.  $-4$    $4$

2.  $2$    $-6$

Simplify these expressions. Work from left to right.

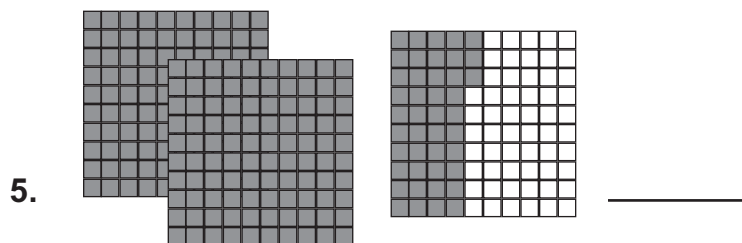
3.  $9 + 2 - 3$

4.  $6 \times 4 + 3$

**Decimals**

of 8 problems correct

Write the decimal for the picture.



Fill in the blanks with *ones*, *tenths*, or *hundredths*.

6. 4.25 has 2 \_\_\_\_\_, 4 \_\_\_\_\_, and 5 \_\_\_\_\_.

**Level 400**

**Order these decimals from greatest to least.**

7. 4.48    4.73    4.39    4.82

\_\_\_\_\_

**Round to the nearest whole number.**

8. 2.3 \_\_\_\_\_

9. 5.6 \_\_\_\_\_

10. 4.5 \_\_\_\_\_

**Add or subtract.**

$$\begin{array}{r} 0.23 \\ 4.16 \\ 11. + 23.15 \\ \hline \end{array}$$

$$\begin{array}{r} 43.12 \\ 12. - 4.36 \\ \hline \end{array}$$

**Division**

**of 5 problems correct**

**Find the quotients. Check the third problem by multiplying.**

13.  $6 \overline{)59}$

14.  $4 \overline{)84}$

15.  $8 \overline{)652}$

16. Check



Find the quotient. Write the remainder as a fraction.

17.  $4 \overline{)279}$

**Factors**

of 8 problems correct

**Underline the number that has . . .**

- |                     |     |     |     |
|---------------------|-----|-----|-----|
| 18. 2 as a factor.  | 133 | 128 | 43  |
| 19. 5 as a factor.  | 326 | 23  | 140 |
| 20. 10 as a factor. | 140 | 152 | 63  |
| 21. 3 as a factor.  | 36  | 92  | 25  |
| 22. 9 as a factor.  | 130 | 42  | 126 |
| 23. 7 as a factor.  | 24  | 28  | 39  |

**Circle the common factors of each pair of numbers.**

- |              |              |
|--------------|--------------|
| 24. 8 and 32 | 25. 7 and 28 |
| 2, 4, 8      | 2, 4, 8      |
| 3, 6, 9      | 3, 6, 9      |
| 5, 10        | 5, 10        |
| 7            | 7            |

Follow the directions.

26. Circle the improper fraction.  $\frac{3}{8}$   $\frac{9}{6}$   $2\frac{2}{4}$

27. Change  $5\frac{2}{3}$  to an improper fraction. \_\_\_\_\_

28. Change  $\frac{7}{4}$  to a mixed number. \_\_\_\_\_

Solve. Write all answers in simplest form.

29.  $\frac{\frac{12}{12}}{\frac{7}{12}}$

30.  $\frac{1}{\frac{3}{10}}$

31.  $\frac{4\frac{7}{8}}{2\frac{4}{8}}$

32.  $\frac{4\frac{5}{7}}{6\frac{1}{7}}$

33.  $\frac{3\frac{7}{18}}{6\frac{5}{18}}$

34.  $\frac{3\frac{4}{5}}{2\frac{3}{5}}$

Find the answers.

35.  $\frac{1}{3}$  of 24 \_\_\_\_\_

36.  $\frac{1}{4}$  of 48 \_\_\_\_\_

Multiply the numerators and denominators by 5 to make equal fractions.

37.  $\frac{1}{4} = \frac{\quad}{\quad}$

38.  $\frac{2}{9} = \frac{\quad}{\quad}$

Write the missing numerators.

39.  $\frac{2}{7} = \frac{\quad}{14}$

40.  $\frac{3}{5} = \frac{\quad}{20}$

**Geometry**

of 15 problems correct

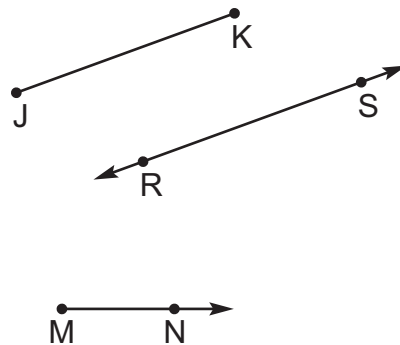
Fill in the blanks. Use letters and symbols.

41. Name the line segment. \_\_\_\_\_

42. Name the ray. \_\_\_\_\_

43. Name the line. \_\_\_\_\_

44.  $\overline{JK}$  is parallel to \_\_\_\_\_.



Answer the questions.

45. The sandbox in Randy’s yard is 5 feet wide and 7 feet long. What is the area of the sandbox?

\_\_\_\_\_

46. What is the perimeter of Randy’s sandbox?

\_\_\_\_\_

47. What is the volume of a box of envelopes that measures 7 inches long, 3 inches wide, and 4 inches high?

\_\_\_\_\_

My Work Space

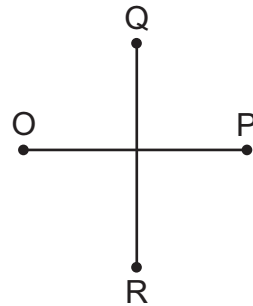
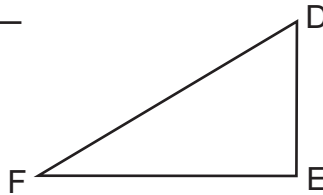
**Level 400**

**Fill in the blanks. Use letters and symbols.**

48.  $\overline{OP}$  is perpendicular to \_\_\_\_\_.

49.  $\overline{OP}$  intersects \_\_\_\_\_.

50. Name the triangle. \_\_\_\_\_

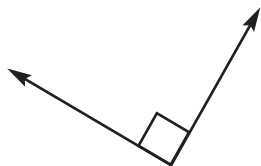


**Fill in the blanks.**


51. If the radius of a circle is 6 inches, the diameter is \_\_\_\_\_ inches.

52. If the diameter of a circle is 4 meters, the radius is \_\_\_\_\_ meters.

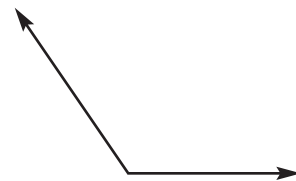
**Write *acute*, *obtuse*, or *right* on the line below each angle.**



53. \_\_\_\_\_



54. \_\_\_\_\_



55. \_\_\_\_\_

**Measures**



**of 4 problems correct**

**Measure the line to the quarter inch.** \_\_\_\_\_

56. \_\_\_\_\_ in

Finish these function charts.

57.

feet	3	6		12		21	
yards	1		6		3		8

58.

quarts	4	8		12		32	
gallons	1		4		6		5

59.

centimeters	100		700		500	
meters	1	8		4		9

**Multiplication**

of 7 problems correct

Write the products.

60.  $\begin{array}{r} \$2.24 \\ \times 9 \\ \hline \end{array}$       61.  $\begin{array}{r} 34 \\ \times 2 \\ \hline \end{array}$       62.  $\begin{array}{r} 42 \\ \times 30 \\ \hline \end{array}$       63.  $\begin{array}{r} 326 \\ \times 52 \\ \hline \end{array}$       64.  $\begin{array}{r} 416 \\ \times 281 \\ \hline \end{array}$

Write the products.

65.  $\begin{array}{r} 12 \\ \times 2 \\ \hline \end{array}$      $\begin{array}{r} 12 \\ \times 8 \\ \hline \end{array}$      $\begin{array}{r} 12 \\ \times 9 \\ \hline \end{array}$      $\begin{array}{r} 12 \\ \times 11 \\ \hline \end{array}$      $\begin{array}{r} 12 \\ \times 3 \\ \hline \end{array}$      $\begin{array}{r} 12 \\ \times 6 \\ \hline \end{array}$      $\begin{array}{r} 12 \\ \times 7 \\ \hline \end{array}$      $\begin{array}{r} 12 \\ \times 12 \\ \hline \end{array}$      $\begin{array}{r} 12 \\ \times 5 \\ \hline \end{array}$      $\begin{array}{r} 12 \\ \times 4 \\ \hline \end{array}$

**Level 400**

**Write the products.**

66.  $\begin{array}{r} 11 \\ \times 4 \\ \hline \end{array}$   $\begin{array}{r} 11 \\ \times 6 \\ \hline \end{array}$   $\begin{array}{r} 11 \\ \times 2 \\ \hline \end{array}$   $\begin{array}{r} 11 \\ \times 11 \\ \hline \end{array}$   $\begin{array}{r} 11 \\ \times 7 \\ \hline \end{array}$   $\begin{array}{r} 11 \\ \times 3 \\ \hline \end{array}$   $\begin{array}{r} 11 \\ \times 10 \\ \hline \end{array}$   $\begin{array}{r} 11 \\ \times 9 \\ \hline \end{array}$   $\begin{array}{r} 11 \\ \times 5 \\ \hline \end{array}$   $\begin{array}{r} 11 \\ \times 8 \\ \hline \end{array}$

**Numbers**

**of 5 problems correct**

**Write words for the number.**

67. 125,316,002 \_\_\_\_\_  
\_\_\_\_\_

**Write the numbers for the words.**

68. three hundred twenty-three million, four hundred thirteen thousand, four hundred forty-six

\_\_\_\_\_

69. four hundred six million, two thousand, forty \_\_\_\_\_

**Fill in the blanks with the correct digit.**

70. In 503,214,867, \_\_\_\_\_ is in the hundred millions place.

71. In 503,214,867, \_\_\_\_\_ is in the millions place.

## Ratios

 of 2 problems correct

Write the ratios.

72. The chocolate candy bar was 10 cm long and 5 cm wide. What was the ratio of length to width? \_\_\_\_\_

73. Randy caught 4 trout and 5 bass. What was the ratio of bass to trout? \_\_\_\_\_

## Rounding / Estimating

 of 14 problems correct

Round to the nearest dollar.

74. \$24.53 \_\_\_\_\_

75. \$3.50 \_\_\_\_\_

76. \$16.23 \_\_\_\_\_

Round to the nearest 10 to estimate.

77. estimate  $46 - 15$ 

$$\underline{\quad} - \underline{\quad} = \underline{\quad}$$

Round to the nearest 100 to estimate.

78. estimate  $236 + 651$ 

$$\underline{\quad} + \underline{\quad} = \underline{\quad}$$

Round to the nearest 10.

79. 256 \_\_\_\_\_

80. 323 \_\_\_\_\_

81. 294 \_\_\_\_\_

82. 395 \_\_\_\_\_

Round to the nearest 100.

83. 3,625 \_\_\_\_\_

84. 550 \_\_\_\_\_

85. 3,962 \_\_\_\_\_

**Level 400**

**Round to the nearest hundred, then multiply.**

86. estimate  $240 \times 635$

$$\underline{\hspace{2cm}} \times \underline{\hspace{2cm}} = \underline{\hspace{2cm}}$$

**Round to the nearest ten, then multiply.**

87. estimate  $56 \times 45$

$$\underline{\hspace{2cm}} \times \underline{\hspace{2cm}} = \underline{\hspace{2cm}}$$

**Subtraction**

of 4 problems correct

**Write the differences.**

88. 
$$\begin{array}{r} \$36.00 \\ - 4.23 \\ \hline \end{array}$$

89. 
$$\begin{array}{r} 50,003 \\ - 4,236 \\ \hline \end{array}$$

90. 
$$\begin{array}{r} 4,593 \\ - 657 \\ \hline \end{array}$$

**Copy and solve.**

91.  $\$43.26 - 17.06$











**CLE**



**CHRISTIAN LIGHT PUBLICATIONS, INC.**

Copyrighted material. May not be reproduced without permission from the publisher.

Math 100-400 D.T. 746410

