

First Grade

**Pre-Assessment Unit 3:
More Addition and
Subtraction**

Name: _____

Date: _____

PRE-ASSESSMENT

UNIT 3: MORE ADDITION & SUBTRACTION

CCSS: 1.OA.A.1, 1.OA.A.2, 1.OA.B.3, 1.OA.B.4,
1.OA.C.5, 1.OA.C.6, 1.OA.D.7, 1.OA.D.8

TEKS: 1.3 B,C,D,E 1.5 A,D,E,F

Circle the correct answer.

Which number sentence below is the "flip flop" or related fact to this number sentence?

$$9 + 3 = 12$$

A $9 + 3 = 12$

B $10 + 2 = 12$

C $3 + 9 = 12$

Which number sentence is a related fact to this number sentence below?

$$3 + 10 = 13$$

A $10 - 3 = 7$

B $13 - 3 = 10$

C $3 - 1 = 2$

Find the sum.

$$16 + 3 =$$

A 13

B 17

C 19

Find the sum.

$$12 + 5 =$$

A 8

B 17

C 20

PRE-ASSESSMENT

UNIT 3: MORE ADDITION & SUBTRACTION

Circle the correct answer.

Circle the 2 numbers that make ten together.

5
6 3
7
1 8

What number belongs in the box?

$$8 + \square = 15$$

- A 7
B 23
C 6

Find the difference.

$$16 - 4 =$$

- A 8
B 12
C 10

Find the difference.

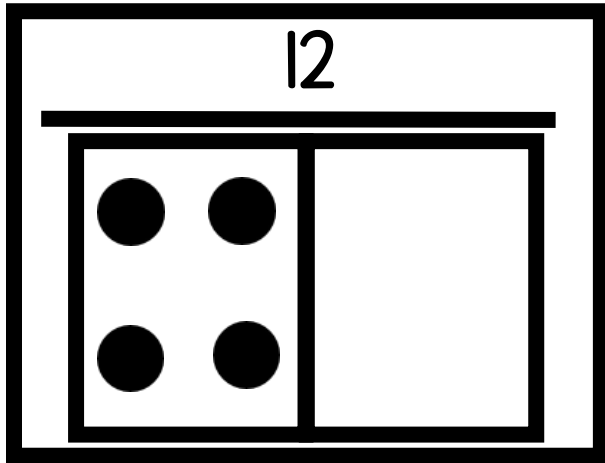
$$19 - 10 =$$

- A 10
B 9
C 11

POST-ASSESSMENT

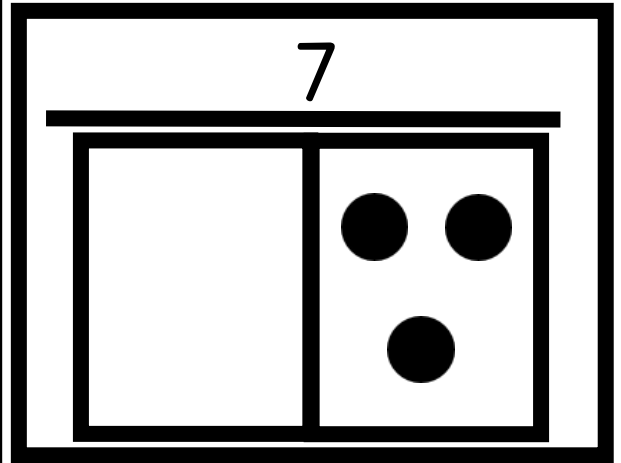
UNIT 3: MORE ADDITION & SUBTRACTION

Write a number sentence to match. Fill in the missing number.



_____ + _____ = _____

Write a number sentence to match. Fill in the missing number.



_____ + _____ = _____

Draw, write a number sentence, and solve.

Mateo has 15 marbles. He finds 2 more. How many marbles does Mateo have now?

Draw, write a number sentence, and solve.

Laney has 7 beads. Her friend has 11 beads. How many **less** beads does Laney have?

POST-ASSESSMENT

UNIT 3: MORE ADDITION & SUBTRACTION

Draw, write a number sentence, and solve.

There are **some** ducks in the pond. 4 more ducks come and join. Now there are 12 ducks. How many ducks were in the pond at first?

Draw, write a number sentence, and solve.

I have 6 coins in my pocket. My friend has some coins. Together we have 13 coins. How many coins does my friend have?

Add or subtract?

$$8 \square 7 = 15$$

Add or subtract?

$$14 \square 4 = 10$$

POST-ASSESSMENT

UNIT 3: MORE ADDITION & SUBTRACTION

Make ten then count on.
Solve.

$$1 + 7 + 9$$

Make ten then count on.
Solve.

$$8 + 6 + 4$$

Circle the doubles fact. Solve all
the facts.

$$10 + 11 =$$

$$11 + 1 =$$

$$11 + 11 =$$

Circle the doubles fact. Solve all
the facts.

$$4 + 2 =$$

$$2 + 2 =$$

$$3 + 2 =$$

First Grade

**Post-Assessment Unit 3:
More Addition and
Subtraction**

Name: _____

Date: _____

POST-ASSESSMENT

UNIT 3: MORE ADDITION & SUBTRACTION

CCSS: 1.OA.A.1, 1.OA.A.2, 1.OA.B.3, 1.OA.B.4,
1.OA.C.5, 1.OA.C.6, 1.OA.D.7, 1.OA.D.8

TEKS: 1.3 B,C,D,E 1.5 A,D,E,F

Circle the correct answer.

Which number sentence below is the "flip flop" or related fact to this number sentence?

$$3 + 5 = 8$$

A $4 + 3 = 7$

B $5 + 3 = 8$

C $6 + 2 = 8$

Which number sentence is a related fact to this number sentence below?

$$3 + 5 = 8$$

A $8 - 3 = 5$

B $8 - 1 = 7$

C $9 - 1 = 8$

Find the sum.

$$12 + 2 =$$

A 15

B 14

C 13

Find the sum.

$$13 + 2 =$$

A 14

B 16

C 15

POST-ASSESSMENT

UNIT 3: MORE ADDITION & SUBTRACTION

Circle the correct answer.

Circle the 2 numbers that make ten together.

2 4 5
7
1 8

What number belongs in the box?

$$8 + \square = 14$$

- A 4
B 5
C 6

Find the difference.

$$13 - 4 =$$

- A 8
B 9
C 10

Find the difference.

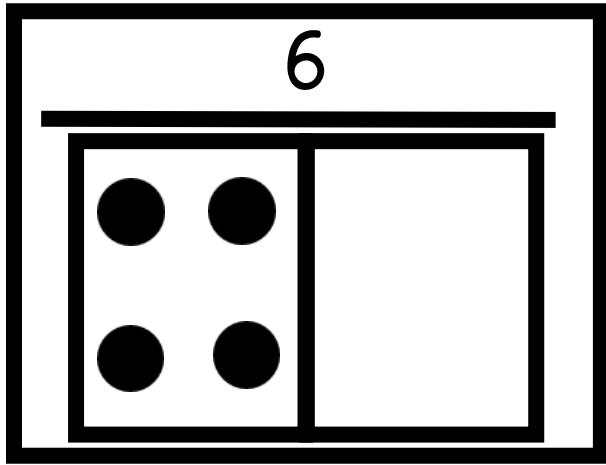
$$17 - 6 =$$

- A 10
B 9
C 11

POST-ASSESSMENT

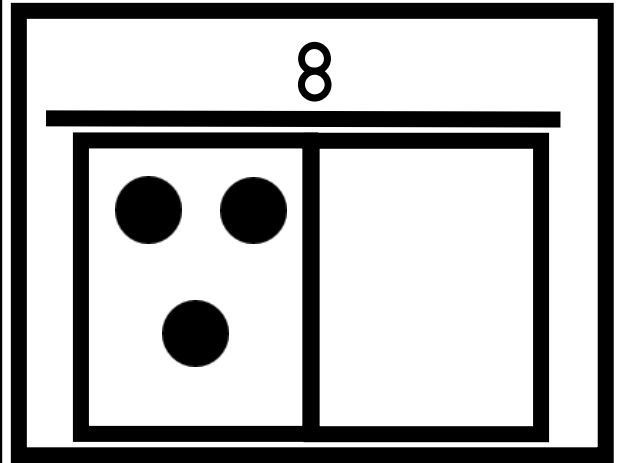
UNIT 3: MORE ADDITION & SUBTRACTION

Write a number sentence to match. Fill in the missing number.



_____ + _____ = _____

Write a number sentence to match. Fill in the missing number.



_____ + _____ = _____

Draw, write a number sentence, and solve.

Sam has 8 balls. He finds 3 more. How many balls does Sam have now?

Draw, write a number sentence, and solve.

Luke has 6 chips. His friend has 9 chips. How many **more** chips does his friend have?

POST-ASSESSMENT

UNIT 3: MORE ADDITION & SUBTRACTION

Draw, write a number sentence, and solve.

There are **some** eggs in the nest. The hen lays 5 more eggs. Now there are 9 eggs. How many eggs were in the nest at first?

Draw, write a number sentence, and solve.

I have 7 buttons in my pocket. My friend has some buttons. Together we have 16 buttons. How many buttons does my friend have?

Add or subtract?

$$8 \square 7 = 15$$

Add or subtract?

$$14 \square 4 = 10$$

POST-ASSESSMENT

UNIT 3: MORE ADDITION & SUBTRACTION

Make ten then count on.
Solve.

$$8 + 2 + 5$$

Make ten then count on.
Solve.

$$7 + 3 + 2$$

Circle the doubles fact. Solve all
the facts.

$$8 + 7 =$$

$$7 + 7 =$$

$$7 + 8 =$$

Circle the doubles fact. Solve all
the facts.

$$8 + 8 =$$

$$6 + 7 =$$

$$8 + 9 =$$

First Grade

**Pre-Assessment Unit 3:
More Addition and
Subtraction**

Name: _____

Date: _____

PRE-ASSESSMENT

UNIT 3: MORE ADDITION & SUBTRACTION

Circle the correct answer.

Which number sentence below is the "flip flop" or related fact to this number sentence?

$$9 + 3 = 12$$

CCSS: 1.OA.D.7
TEKS: 1.3 D

A $9 + 3 = 12$

B $10 + 2 = 12$

☒ C $3 + 9 = 12$

Which number sentence is a related fact to this number sentence below?

$$3 + 10 = 13$$

CCSS: 1.OA.D.7
TEKS: 1.3 D

A $10 - 3 = 7$

☒ B $13 - 3 = 10$

C $3 - 1 = 2$

Find the sum.

$$16 + 3 =$$

CCSS: 1.OA.C.6
TEKS: 1.3 D

A 13

B 17

☒ C 19

Find the sum.

$$12 + 5 =$$

CCSS: 1.OA.C.6
TEKS: 1.3 D

A 8

☒ B 17

C 20

PRE-ASSESSMENT

UNIT 3: MORE ADDITION & SUBTRACTION

CCSS: 1.OA.A.1, 1.OA.B.3, 1.OA.B.4,
1.OA.C.5, 1.OA.C.6, 1.OA.D.7, 1.OA.D.8

TEKS: 1.3 B,C,D,E 1.5 D,E,F,G

Circle the correct answer.

Circle the 2 numbers that make ten together.

CCSS: 1.OA.C.6,
TEKS: 1.3 C

5
6 3
7
1 8

What number belongs in the box?

CCSS:1.OA.C.5

TEKS: 1.3B,C

$$8 + \square = 15$$

A

7

B

23

C

6

Find the difference. CCSS:1.OA.C.6
TEKS: 1.3D

$$16 - 4 =$$

A 8

B 12

C 10

Find the difference. CCSS:1.OA.C.6
TEKS: 1.3D

$$19 - 10 =$$

A 10

B 9

C 11

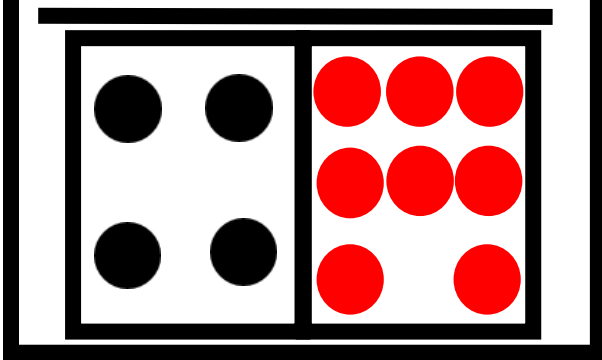
POST-ASSESSMENT

UNIT 3: MORE ADDITION & SUBTRACTION

Write a number sentence to match. Fill in the missing number.

CCSS: 1.OA.D.8
TEKS: 1.5F

12




$$\underline{4} + \underline{8} = \underline{\quad}$$

Write a number sentence to match. Fill in the missing number.

CCSS: 1.OA.D.8
TEKS: 1.5F


7



$$\underline{4} + \underline{3} = \underline{7}$$


Draw, write a number sentence, and solve. CCSS: 1.OA.C.5,6
TEKS: 1.5 D

Mateo has 15 marbles. He finds 2 more. How many marbles does Mateo have now?



Draw, write a number sentence, and solve. CCSS: 1.OA.C.5,6
TEKS: 1.5 D

Laney has 7 beads. Her friend has 11 beads. How many **less** beads does Laney have?



$$11 - 7 = 4$$

POST-ASSESSMENT


UNIT 3: MORE ADDITION & SUBTRACTION

Draw, write a number sentence, and solve.

CCSS: 1.OA.D.8

TEKS: 1.5 D, F

There are **some** ducks in the pond. 4 more ducks come and join. Now there are 12 ducks. How many ducks were in the pond at first?




$$\boxed{8} + 4 = 12$$

Draw, write a number sentence, and solve.

CCSS: 1.OA.D.8

TEKS: 1.5 D, F

I have 6 coins in my pocket. My friend has some coins. Together we have 13 coins. How many coins does my friend have?



$$6 + \boxed{7} = 13$$

Add or subtract?

CCSS: 1.OA.C.6

TEKS: 1.5 D, F, G

$$8 \boxed{+} 7 = 15$$

Add or subtract?

CCSS: 1.OA.C.6

TEKS: 1.5 D, F, G

$$14 \boxed{-} 4 = 10$$

POST-ASSESSMENT

UNIT 3: MORE ADDITION & SUBTRACTION

Make ten then count on.
Solve.

CCSS: 1.OA.A.1, 1.OA.C.6

TEKS: 1.3 B,C,D,E 1.5 D,F,G

$$1 + 7 + 9$$


$$10 + 7 = 17$$

Make ten then count on.
Solve.

CCSS: 1.OA.A.1, 1.OA.C.6

TEKS: 1.3 B,C,D,E 1.5 D,F,G

$$8 + 6 + 4$$


$$10 + 8 = 18$$

Circle the doubles fact. Solve all
the facts.

CCSS: 1.OA.A.1, 1.OA.C.6
TEKS: 1.3 B,C,D,E 1.5 D,F,G

$$10 + 11 = 21$$

$$11 + 1 = 12$$

$$11 + 11 = 22$$

Circle the doubles fact. Solve all
the facts.

CCSS: 1.OA.A.1, 1.OA.C.6
TEKS: 1.3 B,C,D,E 1.5 D,F,G

$$4 + 2 = 6$$

$$2 + 2 = 4$$

$$3 + 2 = 5$$

First Grade

**Post-Assessment Unit 3:
More Addition and
Subtraction**

Name: _____

Date: _____

POST-ASSESSMENT

UNIT 3: MORE ADDITION & SUBTRACTION

Circle the correct answer.

Which number sentence below is the "flip flop" or related fact to this number sentence?

$$3 + 5 = 8$$

CCSS:1.OA.D.7

TEKS: 1.3 D

A

$4 + 3 = 7$

B

$5 + 3 = 8$

C

$6 + 2 = 8$

Which number sentence is a related fact to this number sentence below?

$$3 + 5 = 8$$

CCSS: 1.OA.D.7

TEKS: 1.3 D

A

$8 - 3 = 5$

B

$8 - 1 = 7$

C

$9 - 1 = 8$

Find the sum.

$$12 + 2 =$$

CCSS:1.OA.C.6

TEKS: 1.3 D

A

15

B

14

C

13

Find the sum.

$$13 + 2 =$$

CCSS:1.OA.C.6

TEKS: 1.3 D

A

14

B

16

C

15

POST-ASSESSMENT

UNIT 3: MORE ADDITION & SUBTRACTION

Circle the correct answer.

Circle the 2 numbers that make ten together.

CCSS: 1.OA.C.6,
TEKS: 1.3 C

4
2
5
7
1
8

What number belongs in the box?

CCSS:1.OA.C.5
TEKS: 1.3B,C

$$8 + \square = 14$$

A 4
B 5
C 6

Find the difference. CCSS:1.OA.C.6
TEKS: 1.3D

$$13 - 4 =$$

A 8
B 9
C 10

Find the difference. CCSS:1.OA.C.6
TEKS: 1.3D

$$17 - 6 =$$

A 10
B 9
C 11

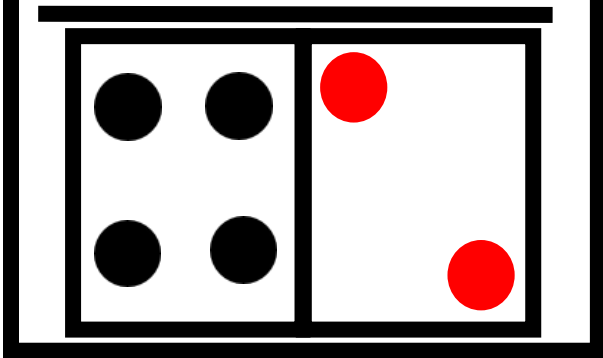
POST-ASSESSMENT

UNIT 3: MORE ADDITION & SUBTRACTION

Write a number sentence to match. Fill in the missing number.

CCSS: 1.OA.D.8
TEKS: 1.5F

6




$$\underline{4} + \underline{2} = \underline{6}$$

Write a number sentence to match. Fill in the missing number.

CCSS: 1.OA.D.8
TEKS: 1.5F

8




$$\underline{3} + \underline{5} = \underline{8}$$

Draw, write a number sentence, and solve.

CCSS: 1.OA.C.5,6
TEKS: 1.5 D

Sam has 8 balls. He finds 3 more. How many balls does Sam have now?




$$8 + 3 = \boxed{11}$$

Draw, write a number sentence, and solve.

CCSS: 1.OA.C.5,6
TEKS: 1.5 D

Luke has 6 chips. His friend has 9 chips. How many **more** chips does his friend have?



$$9 - 6 = \boxed{3}$$

POST-ASSESSMENT


UNIT 3: MORE ADDITION & SUBTRACTION

Draw, write a number sentence, and solve.

CCSS: 1.OA.D.8
TEKS: 1.5 D, F

There are **some** eggs in the nest.

The hen lays 5 more eggs. Now there are 9 eggs. How many eggs were in the nest at first?



$$\boxed{4} + 5 = 9$$


Draw, write a number sentence, and solve.

CCSS: 1.OA.D.8
TEKS: 1.5 D, F

I have 7 buttons in my pocket.

My friend has some buttons.

Together we have 16 buttons. How many buttons does my friend have?



$$7 + \boxed{9} = 16$$

Add or subtract?

CCSS: 1.OA.C.6
TEKS: 1.5 D, F, G

$$8 \boxed{+} 7 = 15$$

Add or subtract?

CCSS: 1.OA.C.6
TEKS: 1.5 D, F, G

$$14 \boxed{-} 4 = 10$$

POST-ASSESSMENT

UNIT 3: MORE ADDITION & SUBTRACTION

Make ten then count on.
Solve.

CCSS: 1.OA.A.1, 1.OA.C.6
TEKS: 1.3 B,C,D,E 1.5 D,F,G

$$8 + 2 + 5$$


$$10 + 5 = 15$$

Make ten then count on.
Solve.

CCSS: 1.OA.A.1, 1.OA.C.6
TEKS: 1.3 B,C,D,E 1.5 D,F,G

$$7 + 3 + 2$$


$$10 + 2 = 12$$

Circle the doubles fact. Solve all
the facts.

CCSS: 1.OA.A.1, 1.OA.C.6
TEKS: 1.3 B,C,D,E 1.5 D,F,G

$$8 + 7 = 15$$

$$7 + 7 = 14$$


$$7 + 8 = 15$$

Circle the doubles fact. Solve all
the facts.

CCSS: 1.OA.A.1, 1.OA.C.6
TEKS: 1.3 B,C,D,E 1.5 D,F,G

$$8 + 8 = 16$$


$$6 + 7 = 13$$

$$8 + 9 = 17$$