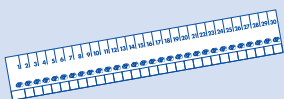


Candle Comparing

An activity for 1 person



Materials



Centibugs Ruler

What to Do

1. Measure each candle. Use a .
2. Record. *Red candle: 10 centimeters*

Show Your Work


3. Write the candle colors in order from shortest to tallest.



Write 3 sentences about the candles.
Use shorter than and taller than.

Skill Practice

Measure each . Use .



_____ centimeters



_____ centimeters




_____ centimeters



_____ centimeters



_____ centimeters

Write the names of the  in order from
longest to shortest.

_____, _____, _____, _____, _____