

First Grade

Pre-Assessment Unit 7: Coins and Graphing

Name: _____

Date: _____

PRE-ASSESSMENT

UNIT 7: COINS AND GRAPHING

CCSS: 1.MD.C.4

TEKS: 1.4 A-C 1.8 A-C 1.9 A-D

Count the sets of like coins. Write the total amount.







Count the sets of mixed coins. Write the total amount.







PRE-ASSESSMENT

UNIT 7: COINS AND GRAPHING

Favorite Pets



Cat



Dog



Fish



Bird



How many?



How many?



How many?



How many?

How many more kids like



than



How many more kids like



than



How many fewer kids like



than



How many fewer kids like




than



PRE-ASSESSMENT

UNIT 7: COINS AND GRAPHING

Answer the questions about the graph.







Which day is the least favorite?

How many more students like Wednesday than Thursday?

Count and make a graph.

Coffee House Graph



	coffee									
	cinnamon bun									
	donut									

First Grade

Post-Assessment Unit 7: Coins and Graphing

Name: _____

Date: _____

POST-ASSESSMENT

UNIT 7: COINS AND GRAPHING

CCSS: 1.MD.C.4

TEKS: 1.4 A-C 1.8 A-C 1.9 A-D

Count the sets of like coins. Write the total amount.







Count the sets of mixed coins. Write the total amount.







POST-ASSESSMENT

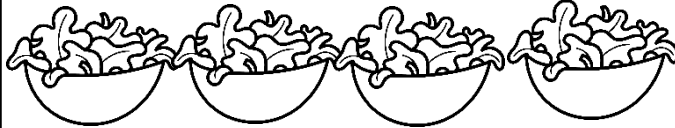
UNIT 7: COINS AND GRAPHING

Answer the questions about the graph.

What did you eat for lunch?





salad




taco



chicken



pizza




How many?



How many?



How many?



How many?

How many more



than



?

How many more



than




?

How many more



than




?

How many more



than



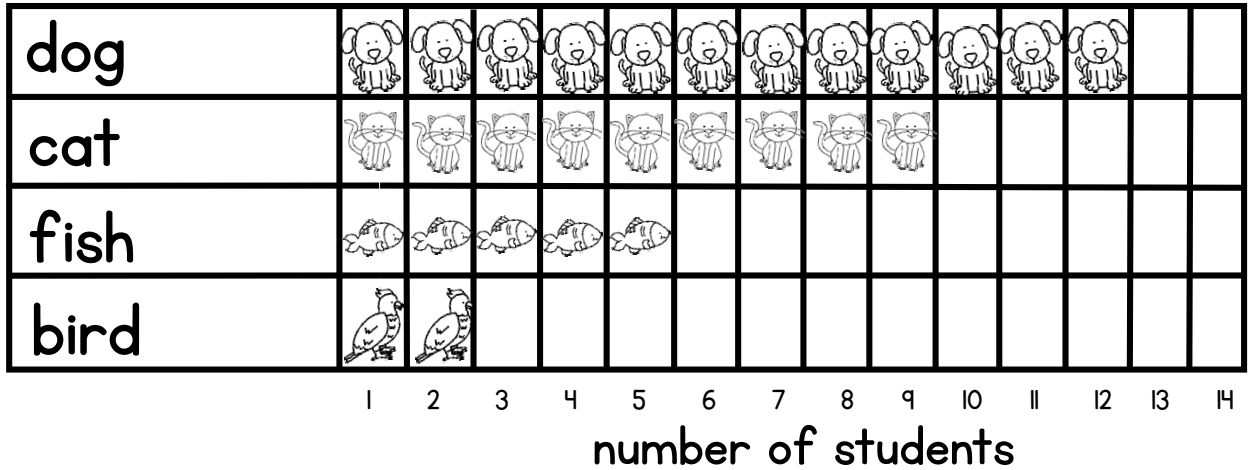
?

POST-ASSESSMENT

UNIT 7: COINS AND GRAPHING

Answer the questions about the graph.

Our Pets

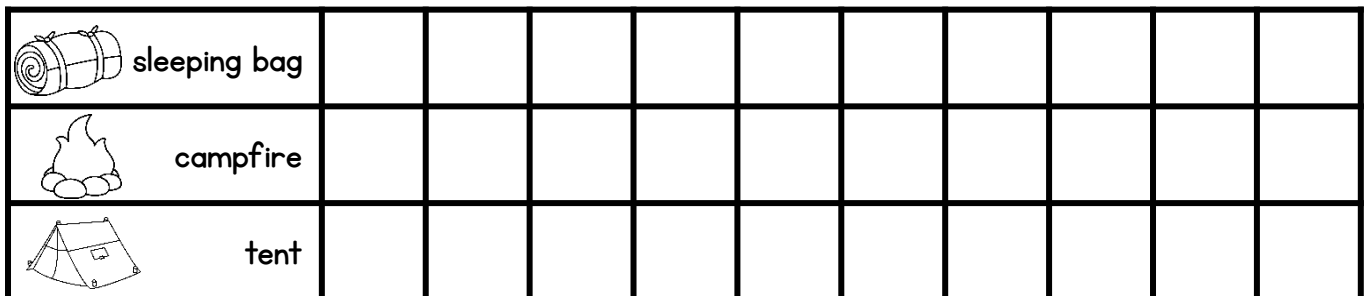



Which one has the greatest? _____

How many more cats than fish? _____

Count and make a graph.

Camp Graph



First Grade

Pre-Assessment Unit 7: Coins and Graphing

Name: _____

Date: _____

PRE-ASSESSMENT

UNIT 7: COINS AND GRAPHING

TEKS: 1.4 B,C

Count the sets of like coins. Write the total amount.



20¢



7¢



60¢

Count the sets of mixed coins. Write the total amount.



24¢



33¢



76¢

PRE-ASSESSMENT

UNIT 7: COINS AND GRAPHING

Favorite Pets



Cat



Dog



Fish



Bird



How many?

3



How many?

5



How many?

2



How many?

1

How many more kids like



than



2

How many more kids like



than



1

How many fewer kids like



than



3

How many fewer kids like




than



2

UNIT 7: COINS AND GRAPHING

Answer the questions about the graph.



Which day is the least favorite?



Monday

How many more students like Wednesday than Thursday?

4

Count and make a graph.

Coffee House Graph



First Grade

Post-Assessment Unit 7: Coins and Graphing

Name: _____

Date: _____

POST-ASSESSMENT

UNIT 7: COINS AND GRAPHING

TEKS: 1.4 B,C

Count the sets of like coins. Write the total amount.



15¢



4¢



40¢



Count the sets of mixed coins. Write the total amount.



19¢



42¢






















30¢



UNIT 7: COINS AND GRAPHING


Answer the questions about the graph.

What did you eat for lunch?

 salad	   
 taco	 
 chicken	    
 pizza	  

How many?
 4


How many more  than ? 2



How many?
 2

How many more  than ? 3

How many?
 5

How many more  than ? 2

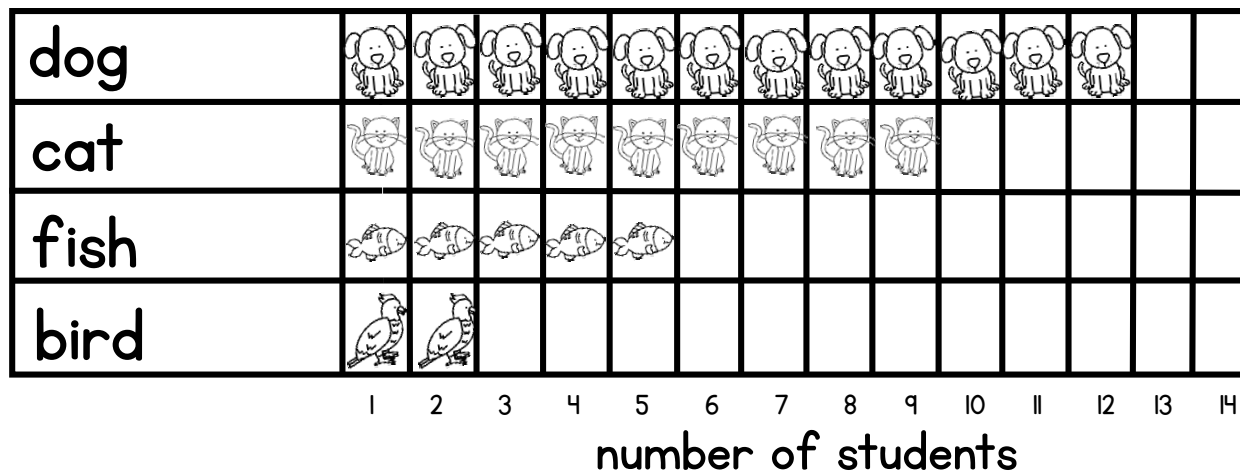
How many?
 3

How many more  than ? 1

UNIT 7: COINS AND GRAPHING

Answer the questions about the graph.

Our Pets



Which one has the greatest?

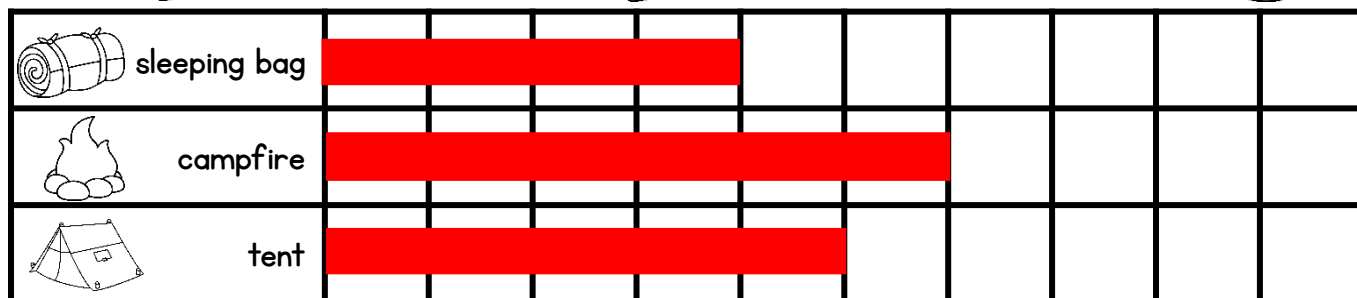

dog

How many more cats than fish?

4

Count and make a graph.

Camp Graph



First Grade

Pre-Assessment Unit 7: Coins and Graphing

Name: _____

Date: _____

PRE-ASSESSMENT

UNIT 7: COINS AND GRAPHING

TEKS: 1.4 B,C

Count the sets of like coins. Write the total amount.



20¢



7¢



60¢

Count the sets of mixed coins. Write the total amount.



24¢



33¢



76¢

PRE-ASSESSMENT

UNIT 7: COINS AND GRAPHING

Favorite Pets



Cat



Dog



Fish



Bird



How many?

3



How many?

5



How many?

2



How many?

1

How many more kids like



than



2

How many more kids like



than



1

How many fewer kids like



than



3

How many fewer kids like




than



2

UNIT 7: COINS AND GRAPHING

Answer the questions about the graph.



Which day is the least favorite?

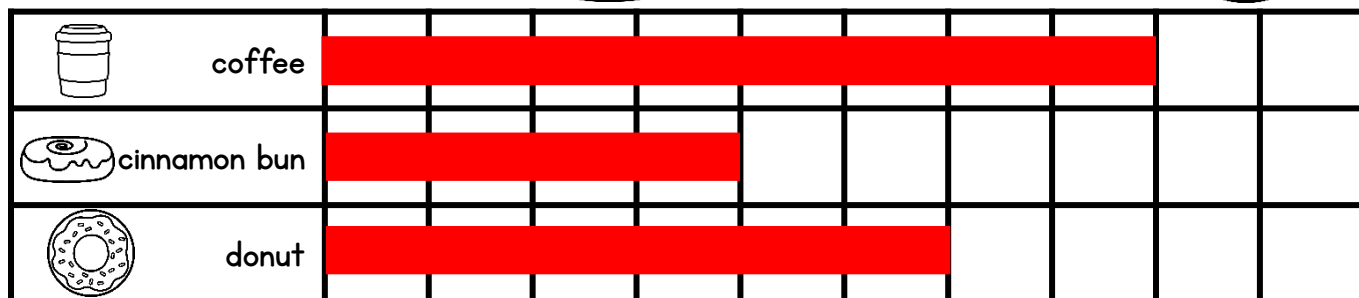

Monday

How many more students like Wednesday than Thursday?

4

Count and make a graph.

Coffee House Graph



First Grade

Post-Assessment Unit 7: Coins and Graphing

Name: _____

Date: _____

POST-ASSESSMENT

UNIT 7: COINS AND GRAPHING

TEKS: 1.4 B,C

Count the sets of like coins. Write the total amount.



15¢



4¢



40¢

Count the sets of mixed coins. Write the total amount.



19¢



42¢






















30¢



UNIT 7: COINS AND GRAPHING


Answer the questions about the graph.

What did you eat for lunch?

 salad	   
 taco	 
 chicken	    
 pizza	  

How many?
 4


How many more  than ? 2



How many?
 2

How many more  than ? 3

How many?
 5

How many more  than ? 2

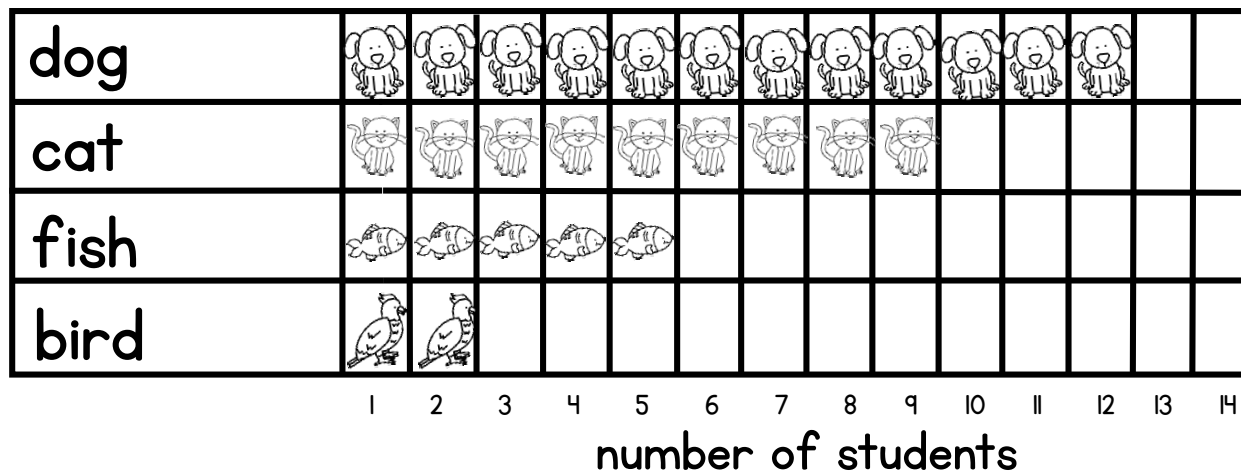
How many?
 3

How many more  than ? 1

UNIT 7: COINS AND GRAPHING

Answer the questions about the graph.

Our Pets



Which one has the greatest?

dog

How many more cats than fish?

4

Count and make a graph.

Camp Graph

