

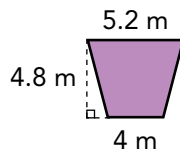
Quadrilateral Area Problems



Solve.

1 The Hammond family plans to buy a cover for their new in-ground swimming pool. The rectangular cover has a length of 38 feet and a width of 20 feet. How many square feet is the area of this pool cover?

2 Marty just bought an area rug for her sunroom. The rug is shaped like the isosceles trapezoid shown. How many square meters is this area rug?




3 A developer is planning to build an office building on a plot of land that is shaped like a parallelogram. The distance of the base of the plot is 0.4 mile, and the height is 0.8 mile. How many square miles is the area of this plot?

4 Gertrude has a flower bed in her backyard that is in the shape of a square. The side length of the flower bed is 2 ft 5 in. How many square inches is the area of the flower bed?

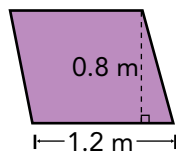
5 Jessica's bedroom is rectangular in shape. The length of her room is 12 feet, and the width is 14 feet. How many square feet is the area of Jessica's bedroom?

6 The Edwards family has a deck attached to the rear of their house. The rectangular deck has a width of 10 feet and a length of 25 feet. How many square feet is the area of the deck?

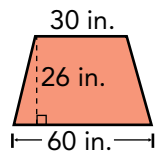
- 7 Buford just framed his favorite poster. The rectangular poster frame has a width of 27 inches and a length of 40 inches. How many square inches is the area of this poster frame?
- 8 One face of a cardboard box has length 8 centimeters and width 3 centimeters. How many square centimeters is the area of this face of the box?
- 9 Some signs are in the shape of a square. How many square inches is the area of the sign shown?



- 10 The base of a fountain on display at the garden show is in the shape of a parallelogram and has the dimensions shown. How many square meters is the area of the base of the fountain?



- 11 Ajeet's preschool has an activity table. The dimensions of the tabletop are shown. How many square inches is the area of the tabletop?



- 12 An outdoor dog kennel has a length of 12 feet and width of 6 feet. How many square feet is the area of the dog kennel?

A	B	C	D	E	F
1,170	0.32	1,080	0.96	24	250
G	H	I	J	K	L
576	168	841	760	22.08	72

Objective: Solve word problems involving areas of quadrilaterals.

