

First Grade

**Pre-Assessment Unit 8:
Mixed Review
Addition and Subtraction**

Name: _____

Date: _____

PRE-ASSESSMENT

UNIT 8: MIXED REVIEW ADDITION & SUB

CCSS: 1.OA.B.3, 1.OA.B.4, 1.OA.C.5, 1.OA.C.6, 1.OA.D.7, 1.OA.D.8

TEKS: 1.3 A-F 1.5 A,D,E,F,G


Circle the correct answer.

Which number sentence belongs in the same fact family as the number sentence?

$$9 + 8 = 15$$

- A $15 + 8 = 23$
- B $15 - 9 = 8$
- C $8 + 8 = 16$


Which equation will balance the scale?



- A $5 + 5$
- B $4 + 7$
- C $11 + 2$

Draw and solve.

Uncle Jerry has 8 cookies in the oven. He adds in 4 more cookies. How many are in the oven now?



- A 15
- B 12
- C 4

Find the sum.

In my garden I have 6 flowers. Two more bloom overnight. Then I plant 5 more flowers. How many flowers do I have altogether?

- A 6
- B 2
- C 13

PRE-ASSESSMENT

UNIT 8: MIXED REVIEW ADDITION & SUB

Use the 120 chart to answer the questions.

1	2	3	4	5	6	7	8	9	10
11	12	13	14	15	16	17	18	19	20
21	22	23	24	25	26	27	28	29	30
31	32	33	34	35	36	37	38	39	40
41	42	43	44	45	46	47	48	49	50
51	52	53	54	55	56	57	58	59	60
61	62	63	64	65	66	67	68	69	70
71	72	73	74	75	76	77	78	79	80
81	82	83	84	85	86	87	88	89	90
91	92	93	94	95	96	97	98	99	100
101	102	103	104	105	106	107	108	109	110
111	112	113	114	115	116	117	118	119	120

$68 + 10 = \square$

$91 + 10 = \square$

$29 + 10 = \square$

$73 + 10 = \square$

$112 - 10 = \square$

$84 - 10 = \square$

$56 - 10 = \square$

$37 - 10 = \square$

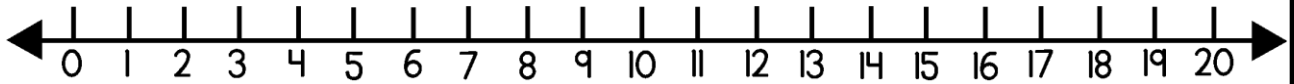
Find ten more.

40	62	109	3	81	100	17

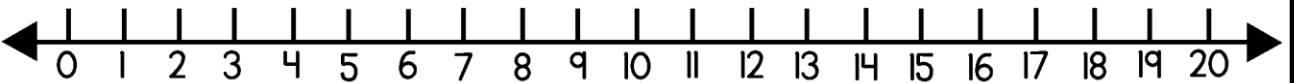
PRE-ASSESSMENT

UNIT 8: MIXED REVIEW ADDITION & SUB

Read and solve each word problem.



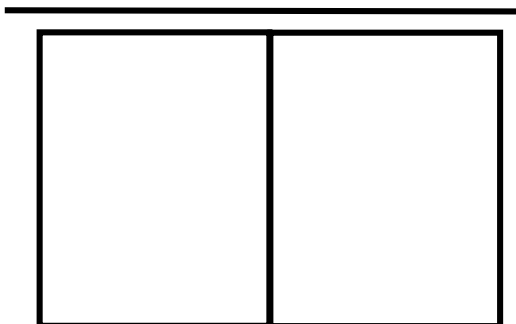
Raj has 18 cotton balls for a science project. He uses 6 of them. How many cotton balls are left?



Penny has 10 pennies. She find 7 more pennies. How many pennies does Penny have?

Draw, write a number sentence, and solve.

Howard has 8 hats. He buys more. Howard now has 13 hats in all. How many did he buy?



PRE-ASSESSMENT

UNIT 8: MIXED REVIEW ADDITION & SUB

Add or subtract? Write a + or a - in the box.

$$8 \square 7 = 15$$

$$2 \square 16 = 18$$

$$19 \square 7 = 12$$

Draw, write a number sentence, and solve.

I have 3 pieces of candy in my pocket. My friend has some pieces of candy too. Together we have 11 pieces of candy. How many pieces of candy does my friend have?

Make a ten or make a double and solve. Show your work.

$$7 + 5 + 7 = \square$$

double

make a ten

$$9 + 8 + 1 = \square$$

double

make a ten

Find the difference.

$$18 - 6 =$$

Find the difference.

$$6 - 5 =$$

First Grade

**Post-Assessment Unit 8:
Mixed Review
Addition and Subtraction**

Name: _____

Date: _____

POST-ASSESSMENT

UNIT 8: MIXED REVIEW ADDITION & SUB

CCSS: 1.OA.B.3, 1.OA.B.4, 1.OA.C.5, 1.OA.C.6, 1.OA.D.7, 1.OA.D.8

TEKS: 1.3 A-F 1.5 A,D,E,F,G


Circle the correct answer.

Which number sentence belongs in the same fact family as the number sentence?

$$3 + 5 = 8$$

- A $4 + 3 = 7$
- B $5 + 3 = 8$
- C $6 + 2 = 8$

Which equation will balance the scale?



- A $5 + 2$
- B $3 + 5$
- C $2 + 6$

Draw and solve.

Dad has 10 fish in the tank. He gets 6 more fish. How many are in the tank now?



- A
- B 16
- C 17

Find the sum.

5 students are riding the bus. At the first stop, 4 students get on the bus. Then 3 more students get on the bus. How many students are on the bus altogether?

- A 9
- B 7
- C 12

POST-ASSESSMENT

UNIT 8: MIXED REVIEW ADDITION & SUB

Use the 120 chart to answer the questions.

1	2	3	4	5	6	7	8	9	10
11	12	13	14	15	16	17	18	19	20
21	22	23	24	25	26	27	28	29	30
31	32	33	34	35	36	37	38	39	40
41	42	43	44	45	46	47	48	49	50
51	52	53	54	55	56	57	58	59	60
61	62	63	64	65	66	67	68	69	70
71	72	73	74	75	76	77	78	79	80
81	82	83	84	85	86	87	88	89	90
91	92	93	94	95	96	97	98	99	100
101	102	103	104	105	106	107	108	109	110
111	112	113	114	115	116	117	118	119	120

$32 + 10 = \square$

$70 + 10 = \square$

$43 + 10 = \square$

$13 + 10 = \square$

$75 - 10 = \square$

$96 - 10 = \square$

$105 - 10 = \square$

$44 - 10 = \square$

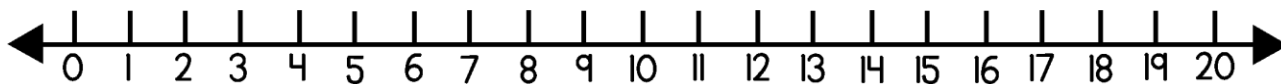
Find ten more.

32	45	107	8	59	81	93

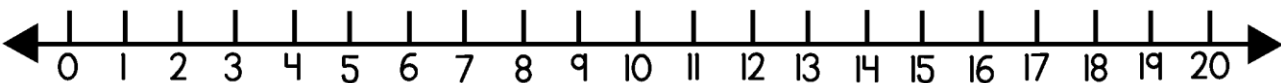
POST-ASSESSMENT

UNIT 8: MIXED REVIEW ADDITION & SUB

Read and solve each word problem.



Kelli has 14 beans on her plate. She eats 8 beans. How many are left?

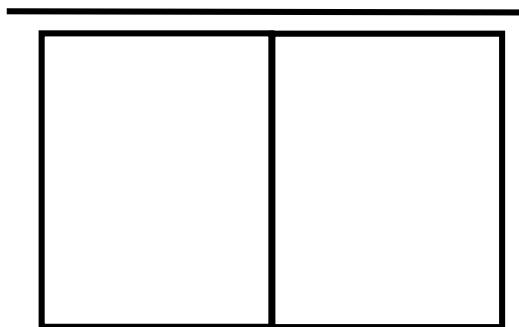


5 people are on the swings. 4 more people get on the swings. How many people are swinging now?

Draw, write a number sentence, and solve.

Lynn has 9 buttons. She buys more. Lynn has 16 buttons in all.

How many did she buy?



POST-ASSESSMENT

UNIT 8: MIXED REVIEW ADDITION & SUB

Add or subtract? Write a + or a - in the box.

$$6 \square 7 = 13$$

$$4 \square 9 = 13$$

$$9 \square 7 = 2$$

Draw, write a number sentence, and solve.

I have 5 buttons in my pocket. My friend has some buttons. Together we have 14 buttons. How many buttons does my friend have?

Make a ten or make a double and solve. Show your work.

$$3 + 2 + 8 = \square$$

double

make a ten

$$2 + 2 + 3 = \square$$

double

make a ten

Find the difference.

$$12 - 3 =$$

Find the difference.

$$9 - 5 =$$

First Grade

**Pre-Assessment Unit 8:
Mixed Review
Addition and Subtraction**

Name: _____

Date: _____

PRE-ASSESSMENT

UNIT 8: MIXED REVIEW ADDITION & SUB

Circle the correct answer.

Which number sentence belongs in the same fact family as the number sentence?

CCSS: 1.OA.B.3
TEKS: 1.3D

$$9 + 8 = 15$$


A $15 + 8 = 23$

B $15 - 9 = 8$

C $8 + 8 = 16$

Which equation will balance the scale?

CCSS: 1.OA.B.3
TEKS: 1.5E



A $5 + 5$

B $4 + 7$

C $11 + 2$


Draw and solve.

Uncle Jerry has 8 cookies in the oven.

He adds in 4 more cookies. How

many are in the oven now?

CCSS: 1.OA.A.1
TEKS: 1.5D



A 15

B 12

C 4

Find the sum.

In my garden I have 6 flowers. Two

more bloom overnight. Then I plant

5 more flowers. How many flowers

do I have altogether?

CCSS: 1.OA.A.1
TEKS: 1.5D

A 6

B 2

C 13

PRE-ASSESSMENT

UNIT 8: MIXED REVIEW ADDITION & SUB

CCSS: 1.NBT.B.3, 1.NBT.C.5,6

TEKS: 1.2 E,F 1.5 C

Use the 120 chart to answer the questions.

1	2	3	4	5	6	7	8	9	10
11	12	13	14	15	16	17	18	19	20
21	22	23	24	25	26	27	28	29	30
31	32	33	34	35	36	37	38	39	40
41	42	43	44	45	46	47	48	49	50
51	52	53	54	55	56	57	58	59	60
61	62	63	64	65	66	67	68	69	70
71	72	73	74	75	76	77	78	79	80
81	82	83	84	85	86	87	88	89	90
91	92	93	94	95	96	97	98	99	100
101	102	103	104	105	106	107	108	109	110
111	112	113	114	115	116	117	118	119	120

$$68 + 10 = 78$$

$$91 + 10 = 101$$

$$29 + 10 = 39$$

$$73 + 10 = 83$$

$$112 - 10 = 102$$

$$84 - 10 = 74$$

$$56 - 10 = 46$$

$$37 - 10 = 27$$

Find ten more.

40	62	109	3	81	100	17
50	72	119	13	91	110	27

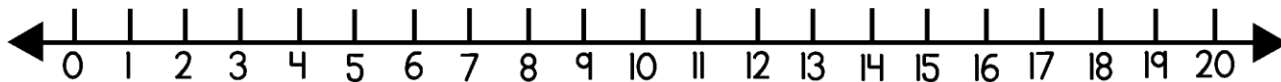
PRE-ASSESSMENT

UNIT 8: MIXED REVIEW ADDITION & SUB

Read and solve each word problem.

CCSS: 1.OA.D.8

TEKS: 1.3F

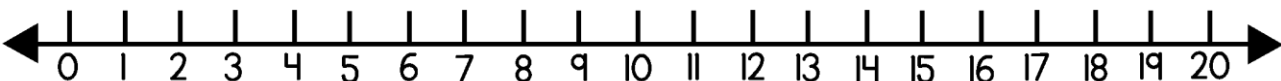


Raj has 18 cotton balls for a science project. He uses 6 of them. How many cotton balls are left?

12

CCSS: 1.OA.D.8

TEKS: 1.3F



Penny has 10 pennies. She find 7 more pennies. How many pennies does Penny have?

17

Draw, write a number sentence, and solve.

TEKS: 1.5D,F
CCSS: 1.OA.D.8

Howard has 8 hats. He buys more. Howard now has 13 hats in all. How many did he buy?

13

8

5

PRE-ASSESSMENT

UNIT 8: MIXED REVIEW ADDITION & SUB

CCSS: 1.OA.A.1, 1.OA.D.7
1.OA.C.5, 1.OA.C.6,
TEKS: 1.3 B,D,E 1.5 D,E,G

CCSS: 1.OA.A.1,
1.OA.C.5, 1.OA.C.6,
TEKS: 1.3 B,D,E 1.5 D,E,F,G

Add or subtract? Write a + or a - in the box.


$$8 \boxed{+} 7 = 15$$

$$2 \boxed{+} 16 = 18$$

$$19 \boxed{-} 7 = 12$$

Draw, write a number sentence, and solve.

I have 3 pieces of candy in my pocket. My friend has some pieces of candy too. Together we have 11 pieces of candy. How many pieces of candy does my friend have?



$$3 + 8 = 11$$

Make a ten or make a double and solve. Show your work.

CCSS: 1.OA.A.2

$$7 + 5 + 7 = \boxed{19}$$

TEKS: 1.3 B,D,E 1.5 D,E,G

double

make a ten

CCSS: 1.OA.A.2

$$9 + 8 + 1 = \boxed{18}$$

TEKS: 1.3 B,D,E 1.5 D,E,G

double

make a ten

Find the difference.

$$18 - 6 = 12$$

CCSS: 1.OA.A.1,
1.OA.C.5, 1.OA.C.6,
TEKS: 1.3 B,D,E 1.5 D,E,F,G

Find the difference.

$$6 - 5 = 1$$

CCSS: 1.OA.A.1,
1.OA.C.5, 1.OA.C.6,
TEKS: 1.3 B,C,D,E 1.5 D,E,F,G

First Grade

**Post-Assessment Unit 8:
Mixed Review
Addition and Subtraction**

Name: _____

Date: _____

POST-ASSESSMENT

UNIT 8: MIXED REVIEW ADDITION & SUB

CCSS: 1.OA.C.6

TEKS: 1.3 B,C,D 1.5 G

Circle the correct answer.

CCSS: 1.OA.B.3, 1.OA.C.6

TEKS:1.5E

Which number sentence belongs in the same fact family as the number sentence?


$$3 + 5 = 8$$

A $4 + 3 = 7$

B $5 + 3 = 8$

C $6 + 2 = 8$

Which equation will balance the scale?



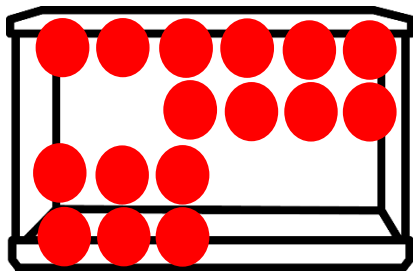
A $5 + 2$

B $3 + 5$

C $2 + 6$

Draw and solve. CCSS: 1.OA.C.6
TEKS: 1.5 D

Dad has 10 fish in the tank. He gets 6 more fish. How many are in the tank now?



A

B 16

C 17

Find the sum. CCSS: 1.OA.B.3, 1.OA.C.6
TEKS:1.5D

5 students are riding the bus. At the first stop, 4 students get on the bus. Then 3 more students get on the bus. How many students are on the bus altogether?

A 9

B 7

C 12

POST-ASSESSMENT

UNIT 8: MIXED REVIEW ADDITION & SUB

CCSS: 1.NBT.B.3, 1.NBT.C.5,6

TEKS: 1.2 E,F 1.5 C

Use the 120 chart to answer the questions.

1	2	3	4	5	6	7	8	9	10
11	12	13	14	15	16	17	18	19	20
21	22	23	24	25	26	27	28	29	30
31	32	33	34	35	36	37	38	39	40
41	42	43	44	45	46	47	48	49	50
51	52	53	54	55	56	57	58	59	60
61	62	63	64	65	66	67	68	69	70
71	72	73	74	75	76	77	78	79	80
81	82	83	84	85	86	87	88	89	90
91	92	93	94	95	96	97	98	99	100
101	102	103	104	105	106	107	108	109	110
111	112	113	114	115	116	117	118	119	120

$32 + 10 = 42$

$70 + 10 = 80$

$43 + 10 = 53$

$13 + 10 = 23$

$75 - 10 = 65$

$96 - 10 = 86$

$105 - 10 = 95$

$44 - 10 = 34$

Find ten more.

32	45	107	8	59	81	93
42	55	117	18	69	91	103

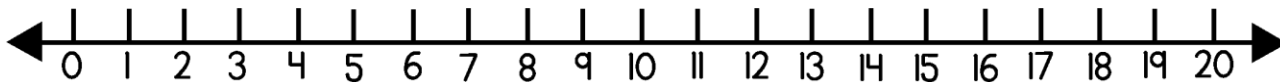
POST-ASSESSMENT

UNIT 8: MIXED REVIEW ADDITION & SUB

Read and solve each word problem.

CCSS: 1.OA.D.8

TEKS: 1.3F

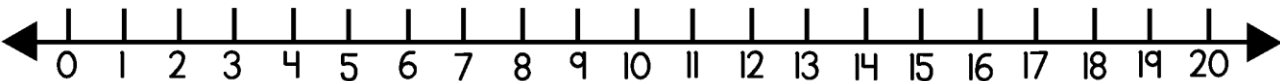


Kelli has 14 beans on her plate. She eats 8 beans. How many are left?

6

CCSS: 1.OA.D.8

TEKS: 1.3F



5 people are on the swings. 4 more people get on the swings. How many people are swinging now?

9

Draw, write a number sentence, and solve.

TEKS: 1.5D,F
CCSS: 1.OA.D.8

Lynn has 9 buttons. She buys more. Lynn has 16 buttons in all.

How many did she buy?

16

9

7

POST-ASSESSMENT

UNIT 8: MIXED REVIEW ADDITION & SUB

CCSS: 1.OA.A.1, 1.OA.D.7
1.OA.C.5, 1.OA.C.6,
TEKS: 1.3 B,D,E 1.5 D,E,G

CCSS: 1.OA.A.1,
1.OA.C.5, 1.OA.C.6,
TEKS: 1.3 B,D,E 1.5 D,E,F,G

Add or subtract? Write a + or a - in the box.


$$6 \boxed{+} 7 = 13$$

$$4 \boxed{+} 9 = 13$$

$$9 \boxed{-} 7 = 2$$

Draw, write a number sentence, and solve.

I have 5 buttons in my pocket. My friend has some buttons. Together we have 14 buttons. How many buttons does my friend have?



$$5 + 9 = 14$$

Make a ten or make a double and solve. Show your work.

CCSS: 1.OA.A.2

$$3 + 2 + 8 = \boxed{13}$$

A red checkmark is drawn under the numbers 3 and 2, pointing to the number 8.

TEKS: 1.3 B,D,E 1.5 D,E,G

double

make a ten

CCSS: 1.OA.A.2

$$2 + 2 + 3 = \boxed{7}$$

A red checkmark is drawn under the numbers 2 and 2, pointing to the number 3.

TEKS: 1.3 B,D,E 1.5 D,E,G

double

make a ten

Find the difference.

$$12 - 3 = 9$$

CCSS: 1.OA.A.1,
1.OA.C.5, 1.OA.C.6,
TEKS: 1.3 B,D,E 1.5 D,E,F,G

Find the difference.

$$9 - 5 = 4$$

CCSS: 1.OA.A.1,
1.OA.C.5, 1.OA.C.6,
TEKS: 1.3 B,C,D,E 1.5 D,E,F,G