


How Many Rabbits Are Left?




Use number pairs. Match the model with the subtraction sentence to find how many are left.




1



2




3




4




5




6



7



8



$$5 - 0 = 5$$

$$2 - 1 = 1$$

$$5 - 3 = 2$$

$$5 - 4 = 1$$

$$4 - 3 = 1$$

$$4 - 1 = 3$$

$$5 - 2 = 3$$

$$4 - 2 = 2$$

Objective: Fluently subtract within 5.

